



UNIVERSITY OF CAMBRIDGE INTERNATIONAL EXAMINATIONS  
General Certificate of Education Ordinary Level

**CHEMISTRY**

**5070/01**

Paper 1 Multiple Choice

**May/June 2009**

**1 hour**

Additional Materials:      Multiple Choice Answer Sheet  
   Soft clean eraser  
   Soft pencil (type B or HB is recommended)



**READ THESE INSTRUCTIONS FIRST**

Write in soft pencil.

Do not use staples, paper clips, highlighters, glue or correction fluid.

Write your name, Centre number and candidate number on the Answer Sheet in the spaces provided unless this has been done for you.

There are **forty** questions on this paper. Answer **all** questions. For each question there are four possible answers **A, B, C** and **D**.

Choose the **one** you consider correct and record your choice in **soft pencil** on the separate Answer Sheet.

**Read the instructions on the Answer Sheet very carefully.**

Each correct answer will score one mark. A mark will not be deducted for a wrong answer.

Any rough working should be done in this booklet.

A copy of the Periodic Table is printed on page 16.

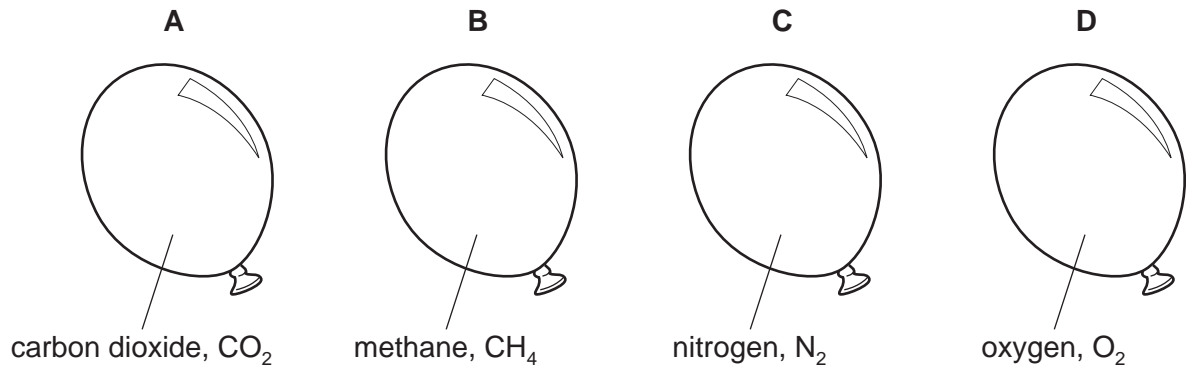
This document consists of **15** printed pages and **1** blank page.



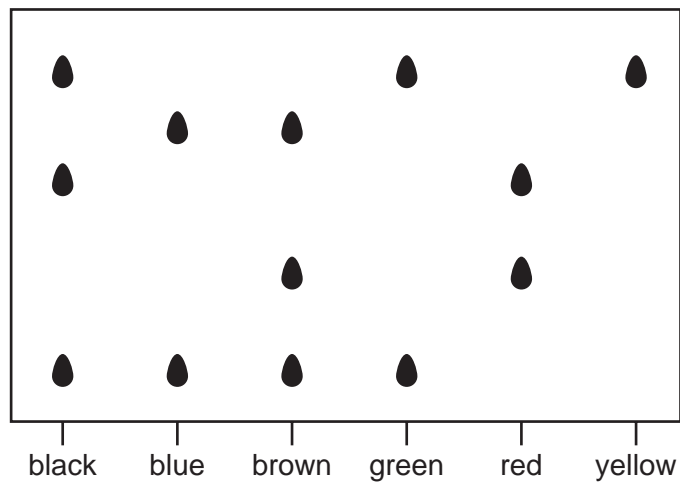
- 1 An inflated balloon goes down because gas molecules can diffuse through the rubber.

Four balloons are filled with different gases at the same temperature and pressure.

Which balloon would go down quickest?



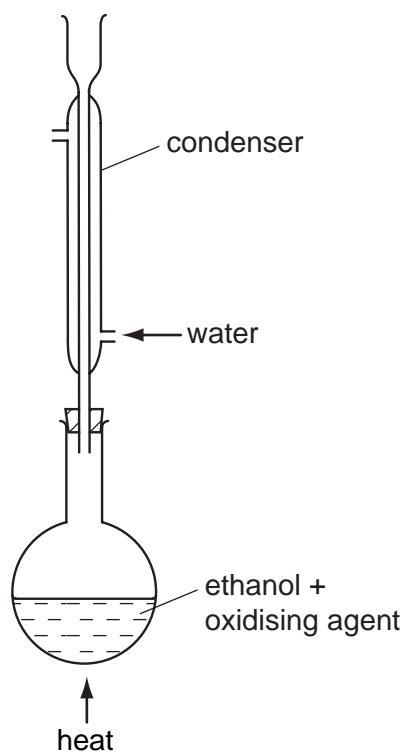
- 2 The diagram shows a chromatogram of several inks.



Which statement is correct?

- A** Black ink can be made by mixing green, red and yellow inks.
- B** Brown ink can be made by mixing blue and red inks.
- C** Yellow ink can be used to make brown ink.
- D** Yellow ink may be present in green ink.

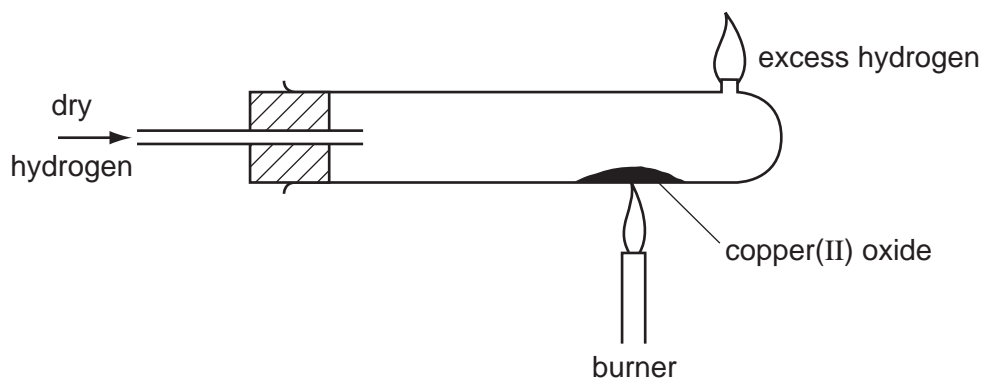
3 The oxidation of ethanol to ethanoic acid is often carried out in the apparatus shown.



What is the purpose of the condenser?

- A** to prevent air reacting with the ethanoic acid
- B** to prevent any ethanol from escaping
- C** to prevent the ethanoic acid changing back to ethanol
- D** to prevent the ethanoic acid reacting with the ethanol

- 4 The diagram shows copper(II) oxide being reduced, by hydrogen, to copper. After reduction is complete, the burner is turned off but the flow of hydrogen is continued until the tube is cool.



Why is the hydrogen allowed to flow through the tube during cooling?

- A to allow the tube to cool slowly
  - B to lessen the risk of explosion in the hot tube
  - C to prevent the copper from reacting with the air
  - D to remove any traces of water left in the tube
- 5 A coin is analysed by dissolving it in nitric acid. To the resulting solution an excess of aqueous ammonia is added and the mixture is filtered.

A brown precipitate remains in the filter paper and a deep blue solution is obtained as the filtrate.

Which metals does the coin contain?

- A aluminium and copper
  - B copper and iron
  - C iron and lead
  - D lead and zinc
- 6 An element X forms a positive ion with the electronic structure 2,8,8.

What is the proton (atomic) number of X?

- A 16
- B 17
- C 18
- D 19

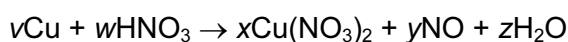
- 7 Which two substances are elements with a giant molecular structure?

- A diamond and graphite
- B diamond and sand
- C methane and iodine
- D methane and sand

- 8 Which compound has both ionic and covalent bonds?
- A ammonium chloride  
 B carbon dioxide  
 C ethyl ethanoate  
 D sodium chloride
- 9 Which statement about the numbers of particles in atoms is correct?

Apart from hydrogen, most atoms contain

- A more neutrons than protons.  
 B more protons than neutrons.  
 C more electrons than protons.  
 D more protons than electrons.
- 10 Which gas contains the same number of molecules as 9 g of water?
- A 2 g of hydrogen  
 B 14 g of nitrogen  
 C 32 g of oxygen  
 D 44 g of carbon dioxide
- 11 The equation for the reaction between copper and nitric acid is shown.



$v$ ,  $w$ ,  $x$ ,  $y$  and  $z$  are whole numbers.

Which values of  $v$ ,  $w$ ,  $x$ ,  $y$  and  $z$  balance the equation?

	$v$	$w$	$x$	$y$	$z$
<b>A</b>	1	2	1	1	1
<b>B</b>	1	4	1	2	2
<b>C</b>	3	4	3	2	2
<b>D</b>	3	8	3	2	4

- 12 The mass of one mole of a chloride formed by a metal Y is 74.5 g.

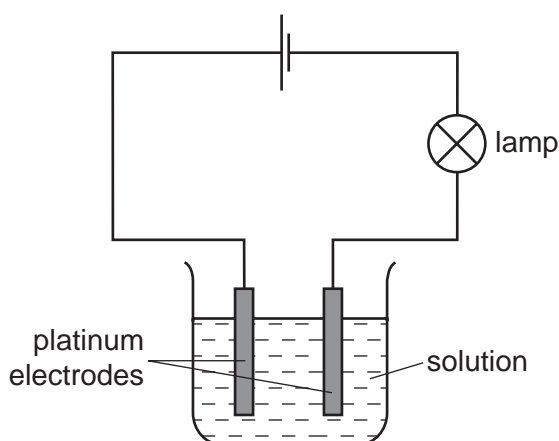
What is the formula of the chloride?

- A  $\text{Y}_3\text{Cl}$                       B  $\text{Y}_2\text{Cl}$                       C  $\text{YCl}$                       D  $\text{YCl}_2$

- 13 Which reactions take place during the electrolysis of aqueous copper(II) sulfate with copper electrodes?

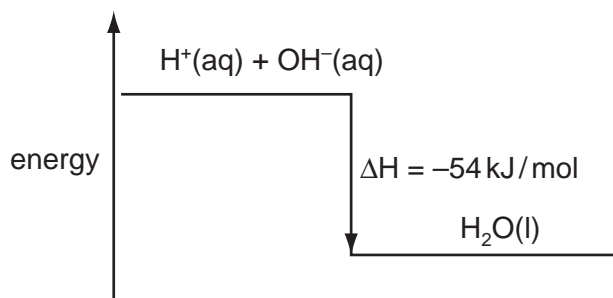
	reaction at positive electrode	reaction at negative electrode
<b>A</b>	$\text{Cu}^{2+} + 2\text{e}^{-} \rightarrow \text{Cu}$	$\text{Cu} \rightarrow \text{Cu}^{2+} + 2\text{e}^{-}$
<b>B</b>	$4\text{OH}^{-} \rightarrow 2\text{H}_2\text{O} + \text{O}_2 + 4\text{e}^{-}$	$\text{Cu}^{2+} + 2\text{e}^{-} \rightarrow \text{Cu}$
<b>C</b>	$\text{Cu} \rightarrow \text{Cu}^{2+} + 2\text{e}^{-}$	$2\text{H}^{+} + 2\text{e}^{-} \rightarrow \text{H}_2$
<b>D</b>	$\text{Cu} \rightarrow \text{Cu}^{2+} + 2\text{e}^{-}$	$\text{Cu}^{2+} + 2\text{e}^{-} \rightarrow \text{Cu}$

- 14 The diagram shows apparatus used to investigate the conductivity of different solutions.



Which substance, in aqueous solution of concentration  $1 \text{ mol/dm}^3$ , would cause the lamp to give the brightest light?

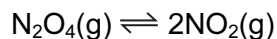
- A** ammonia  
**B** ethanoic acid  
**C** ethanol  
**D** sulfuric acid
- 15 The energy diagram for the reaction between sodium hydroxide and hydrochloric acid is shown.



Which quantity of heat is liberated when  $100 \text{ cm}^3$  of  $1 \text{ mol/dm}^3$  hydrochloric acid reacts with  $100 \text{ cm}^3$  of  $1 \text{ mol/dm}^3$  sodium hydroxide?

- A** 0.54 kJ      **B** 2.70 kJ      **C** 5.40 kJ      **D** 10.8 kJ

- 16 The equation shows a reversible reaction.



The forward reaction is endothermic.

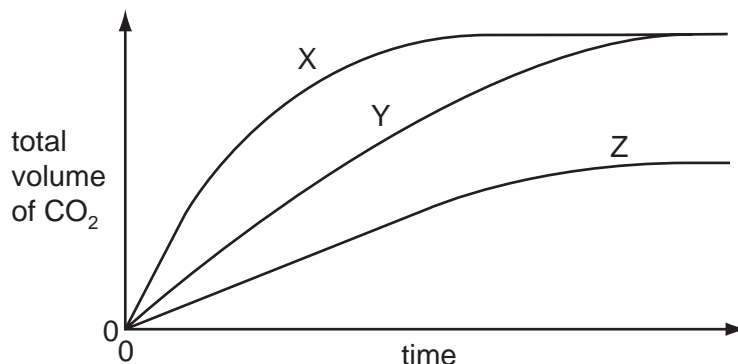
Which of these changes will increase the yield of  $\text{NO}_2$ ?

	pressure	temperature
<b>A</b>	decreased	decreased
<b>B</b>	decreased	increased
<b>C</b>	increased	decreased
<b>D</b>	increased	increased

- 17 In experiment 1, an excess of finely powdered marble is added to  $20 \text{ cm}^3$  of dilute hydrochloric acid.

In experiment 2, carried out under the same conditions of temperature and pressure, an excess of marble chips is added to  $20 \text{ cm}^3$  of dilute hydrochloric acid of the same concentration.

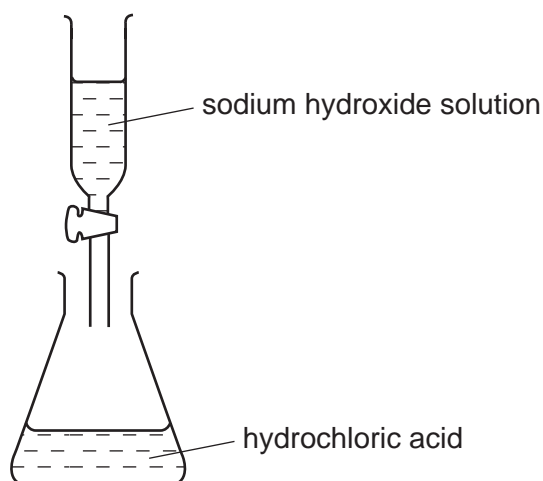
The total volumes of carbon dioxide given off are determined at intervals and plotted against time.



Which pair of curves is obtained in the two experiments?

	experiment 1	experiment 2
<b>A</b>	X	Z
<b>B</b>	X	Y
<b>C</b>	Y	Z
<b>D</b>	Y	X

- 18 What is **not** an example of oxidation?
- A converting iron(III) salts into iron(II) salts
  - B converting magnesium atoms into magnesium ions
  - C dissolving of a copper anode during electrolysis
  - D liberating chlorine from a chloride
- 19 Which metal has a soluble carbonate, chloride and sulfate?
- A barium
  - B calcium
  - C copper
  - D potassium
- 20 Sodium hydroxide solution was added to dilute hydrochloric acid. The pH of the solution in the flask was measured at intervals until no further change of pH took place.



What would be the pH change in this reaction?

- A decrease to 1
  - B decrease to 7
  - C increase to 7
  - D increase to 12
- 21 Why is nickel used in the addition of hydrogen to alkenes?
- A It increases the yield of products.
  - B It lowers the activation energy of the reaction.
  - C It makes the reaction more exothermic.
  - D It prevents a reverse reaction from occurring.



22 Caesium, Cs, is an element in Group I of the Periodic Table.

Which statements about Caesium are true?

- 1 Caesium conducts electricity both when solid and when molten.
- 2 Caesium reacts explosively with water.
- 3 Caesium reacts with water and forms a solution of  $\text{pH} < 7$ .

- A** 1 and 2 only  
**B** 1 and 3 only  
**C** 2 and 3 only  
**D** 1, 2 and 3

23 Elements with the code letters Q and R occupy the positions shown in the outline of the Periodic Table.

														<i>R</i>							
	<i>Q</i>																				

What is the formula of the compound formed between them?

- A**  $\text{QR}_2$                       **B**  $\text{Q}_2\text{R}$                       **C**  $\text{Q}_2\text{R}_3$                       **D**  $\text{Q}_3\text{R}_2$

24 The list shows some properties of metals.

- 1 Metals are good conductors of electricity.
- 2 Metals form ions by the loss of electrons.
- 3 Metals have high melting points.

Mercury is a metallic element.

Which of these statements do **not** apply to mercury?

- A** 1 only                      **B** 1 and 2                      **C** 2 and 3                      **D** 3 only

- 25 In the electrolysis of aluminium oxide to extract pure aluminium a compound called cryolite is first added to the oxide.

What is the reason for adding the cryolite?

- A to reduce the corrosion of the carbon electrodes by oxygen
- B to reduce energy costs
- C to enable the aluminium ions and oxygen ions to move to the electrodes
- D to prevent the aluminium formed from being oxidised back to aluminium oxide

- 26 Iron is extracted from its ore haematite,  $\text{Fe}_2\text{O}_3$ , by a reduction process in the blast furnace.

Which equation for reactions in the blast furnace shows the formation of the reducing agent?

- A  $\text{CaCO}_3 \rightarrow \text{CaO} + \text{CO}_2$
- B  $\text{CaO} + \text{SiO}_2 \rightarrow \text{CaSiO}_3$
- C  $\text{CO}_2 + \text{C} \rightarrow 2\text{CO}$
- D  $\text{C} + \text{O}_2 \rightarrow \text{CO}_2$

- 27 The steel bodies of cars can be protected from rusting by spraying them with zinc.

Why is zinc used?

- A Zinc does not react with acidic exhaust fumes.
- B Zinc forms a stable compound with iron.
- C Zinc has a high melting point.
- D Zinc is higher in the reactivity series than iron.

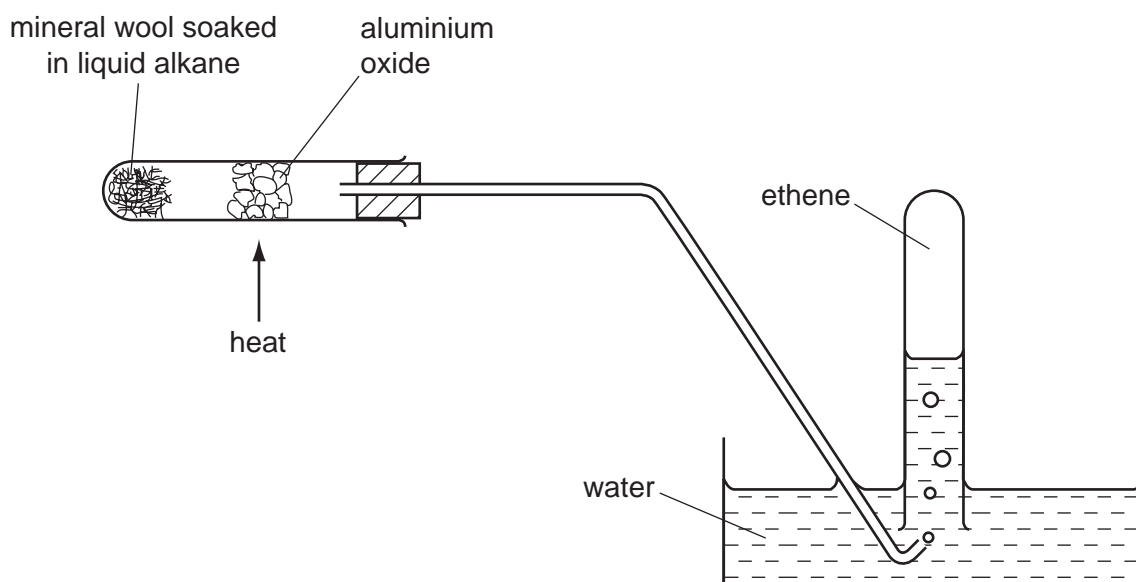
- 28 Solid Y is insoluble in water. It gives off a gas when heated and also when reacted with dilute sulfuric acid.

What is Y?

- A copper(II) carbonate
- B sodium carbonate
- C sodium nitrate
- D zinc oxide

- 29 What is the **ionic** equation for the reaction between zinc and aqueous copper(II) sulfate?
- A  $\text{Zn}^{2+}(\text{aq}) + \text{Cu}(\text{s}) \rightarrow \text{Zn}(\text{s}) + \text{Cu}^{2+}(\text{aq})$
- B  $\text{Zn}^{2+}(\text{aq}) + \text{SO}_4^{2-}(\text{aq}) \rightarrow \text{ZnSO}_4(\text{s})$
- C  $\text{Zn}(\text{s}) + \text{CuSO}_4(\text{aq}) \rightarrow \text{ZnSO}_4(\text{aq}) + \text{Cu}(\text{s})$
- D  $\text{Zn}(\text{s}) + \text{Cu}^{2+}(\text{aq}) \rightarrow \text{Zn}^{2+}(\text{aq}) + \text{Cu}(\text{s})$
- 30 Which gas reacts with sulfuric acid to form a fertiliser?
- A ammonia,  $\text{NH}_3$
- B carbon dioxide,  $\text{CO}_2$
- C hydrogen,  $\text{H}_2$
- D nitrogen,  $\text{N}_2$
- 31 In the Contact process, the sulfur trioxide formed is
- A passed into concentrated sulfuric acid.
- B passed into dilute sulfuric acid.
- C passed into oleum ( $\text{H}_2\text{S}_2\text{O}_7$ ).
- D passed into water.
- 32 Which gas, present in pond water, decreases in concentration during eutrophication?
- A carbon dioxide
- B methane
- C nitrogen
- D oxygen
- 33 Methane is a greenhouse gas.
- Which process releases methane into the air?
- A combustion of petrol
- B decay of vegetable matter
- C photosynthesis
- D volcanic activity

- 34 Carbon dioxide and carbon monoxide are both
- A absorbed by sodium hydroxide.
  - B colourless.
  - C inflammable in air.
  - D lighter than air.
- 35 Which hydrocarbon will burn completely in oxygen to give equal numbers of moles of carbon dioxide and water?
- A  $C_2H_6$
  - B  $C_3H_6$
  - C  $C_4H_{10}$
  - D  $C_5H_{12}$
- 36 The diagram shows the breakdown of an alkane to ethene.



The ethene is then tested with aqueous bromine.

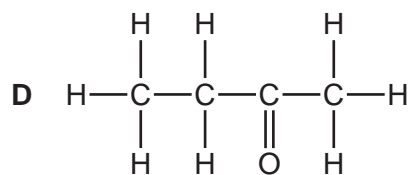
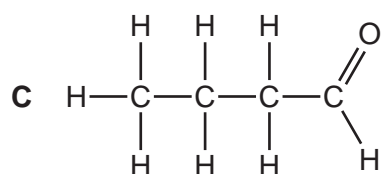
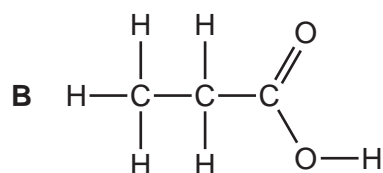
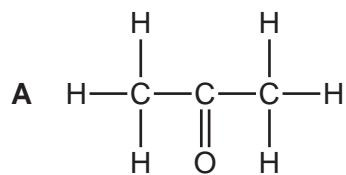
Which information about ethene is correct?

	solubility of ethene gas	action on aqueous bromine
<b>A</b>	insoluble	decolourised
<b>B</b>	insoluble	no reaction
<b>C</b>	soluble	decolourised
<b>D</b>	soluble	no reaction

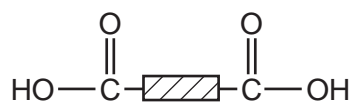


39 Alcohols can be oxidised to form another homologous series of compounds.

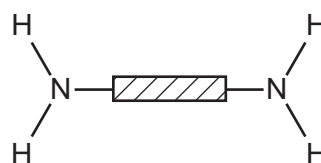
What would be the product of the oxidation of propanol?



40 A polymer X is hydrolysed and the two products are



and



What can be deduced about X?

- A** It is a condensation polymer.
- B** It is made by addition polymerisation.
- C** It is starch.
- D** It is *Terylene*.



**DATA SHEET**  
**The Periodic Table of the Elements**

		Group																																																																																																																																																																																																																																																																																																																																																																																																																																																																																																																																																																																																																																																																																																																																																																																																																																																						
		I	II	III	IV	V	VI	VII	VIII	IX	X																																																																																																																																																																																																																																																																																																																																																																																																																																																																																																																																																																																																																																																																																																																																																																																																																																													
		1 <b>H</b> Hydrogen 1																																																																																																																																																																																																																																																																																																																																																																																																																																																																																																																																																																																																																																																																																																																																																																																																																																																						
7	9	<b>Li</b> Lithium 3	<b>Be</b> Beryllium 4																																																																																																																																																																																																																																																																																																																																																																																																																																																																																																																																																																																																																																																																																																																																																																																																																																																					
23	24	<b>Na</b> Sodium 11	<b>Mg</b> Magnesium 12																																																																																																																																																																																																																																																																																																																																																																																																																																																																																																																																																																																																																																																																																																																																																																																																																																																					
39	40	<b>K</b> Potassium 19	<b>Ca</b> Calcium 20	45 <b>Sc</b> Scandium 21	48 <b>Ti</b> Titanium 22	51 <b>V</b> Vanadium 23	52 <b>Cr</b> Chromium 24	55 <b>Mn</b> Manganese 25	56 <b>Fe</b> Iron 26	59 <b>Co</b> Cobalt 27	59 <b>Ni</b> Nickel 28	64 <b>Cu</b> Copper 29	65 <b>Zn</b> Zinc 30	70 <b>Ga</b> Gallium 31	73 <b>Ge</b> Germanium 32	75 <b>As</b> Arsenic 33	79 <b>Se</b> Selenium 34	80 <b>Br</b> Bromine 35	84 <b>Kr</b> Krypton 36																																																																																																																																																																																																																																																																																																																																																																																																																																																																																																																																																																																																																																																																																																																																																																																																																																					
85	88	<b>Rb</b> Rubidium 37	<b>Sr</b> Strontium 38	89 <b>Y</b> Yttrium 39	91 <b>Zr</b> Zirconium 40	93 <b>Nb</b> Niobium 41	96 <b>Mo</b> Molybdenum 42	101 <b>Ru</b> Ruthenium 44	106 <b>Pd</b> Palladium 46	108 <b>Ag</b> Silver 47	112 <b>Cd</b> Cadmium 48	115 <b>In</b> Indium 49	119 <b>Sn</b> Tin 50	122 <b>Sb</b> Antimony 51	128 <b>Te</b> Tellurium 52	127 <b>I</b> Iodine 53	131 <b>Xe</b> Xenon 54																																																																																																																																																																																																																																																																																																																																																																																																																																																																																																																																																																																																																																																																																																																																																																																																																																							
133	137	<b>Cs</b> Caesium 55	<b>Ba</b> Barium 56	139 <b>La</b> Lanthanum 57	178 <b>Hf</b> Hafnium 72	181 <b>Ta</b> Tantalum 73	184 <b>W</b> Tungsten 74	190 <b>Os</b> Osmium 76	195 <b>Pt</b> Platinum 78	197 <b>Au</b> Gold 79	201 <b>Hg</b> Mercury 80	204 <b>Tl</b> Thallium 81	207 <b>Pb</b> Lead 82	209 <b>Bi</b> Bismuth 83	210 <b>Po</b> Polonium 84	210 <b>At</b> Astatine 85	210 <b>Rn</b> Radon 86																																																																																																																																																																																																																																																																																																																																																																																																																																																																																																																																																																																																																																																																																																																																																																																																																																							
87	226	<b>Fr</b> Francium 87	<b>Ra</b> Radium 88	227 <b>Ac</b> Actinium 89									†																																																																																																																																																																																																																																																																																																																																																																																																																																																																																																																																																																																																																																																																																																																																																																																																																																											
													*58-71 Lanthanoid series †90-103 Actinoid series																																																																																																																																																																																																																																																																																																																																																																																																																																																																																																																																																																																																																																																																																																																																																																																																																																											
		a		X		b																																																																																																																																																																																																																																																																																																																																																																																																																																																																																																																																																																																																																																																																																																																																																																																																																																																		
		Key		X		b																																																																																																																																																																																																																																																																																																																																																																																																																																																																																																																																																																																																																																																																																																																																																																																																																																																		
		a = relative atomic mass		X = atomic symbol		b = proton (atomic) number																																																																																																																																																																																																																																																																																																																																																																																																																																																																																																																																																																																																																																																																																																																																																																																																																																																		
140	141	144	150	152	157	159	162	165	167	169	173	175	181	182	183	186	188	189	191	192	194	196	198	200	201	202	203	204	205	206	207	208	209	210	211	212	213	214	215	216	217	218	219	220	221	222	223	224	225	226	227	228	229	230	231	232	233	234	235	236	237	238	239	240	241	242	243	244	245	246	247	248	249	250	251	252	253	254	255	256	257	258	259	260	261	262	263	264	265	266	267	268	269	270	271	272	273	274	275	276	277	278	279	280	281	282	283	284	285	286	287	288	289	290	291	292	293	294	295	296	297	298	299	300	301	302	303	304	305	306	307	308	309	310	311	312	313	314	315	316	317	318	319	320	321	322	323	324	325	326	327	328	329	330	331	332	333	334	335	336	337	338	339	340	341	342	343	344	345	346	347	348	349	350	351	352	353	354	355	356	357	358	359	360	361	362	363	364	365	366	367	368	369	370	371	372	373	374	375	376	377	378	379	380	381	382	383	384	385	386	387	388	389	390	391	392	393	394	395	396	397	398	399	400	401	402	403	404	405	406	407	408	409	410	411	412	413	414	415	416	417	418	419	420	421	422	423	424	425	426	427	428	429	430	431	432	433	434	435	436	437	438	439	440	441	442	443	444	445	446	447	448	449	450	451	452	453	454	455	456	457	458	459	460	461	462	463	464	465	466	467	468	469	470	471	472	473	474	475	476	477	478	479	480	481	482	483	484	485	486	487	488	489	490	491	492	493	494	495	496	497	498	499	500	501	502	503	504	505	506	507	508	509	510	511	512	513	514	515	516	517	518	519	520	521	522	523	524	525	526	527	528	529	530	531	532	533	534	535	536	537	538	539	540	541	542	543	544	545	546	547	548	549	550	551	552	553	554	555	556	557	558	559	560	561	562	563	564	565	566	567	568	569	570	571	572	573	574	575	576	577	578	579	580	581	582	583	584	585	586	587	588	589	590	591	592	593	594	595	596	597	598	599	600	601	602	603	604	605	606	607	608	609	610	611	612	613	614	615	616	617	618	619	620	621	622	623	624	625	626	627	628	629	630	631	632	633	634	635	636	637	638	639	640	641	642	643	644	645	646	647	648	649	650	651	652	653	654	655	656	657	658	659	660	661	662	663	664	665	666	667	668	669	670	671	672	673	674	675	676	677	678	679	680	681	682	683	684	685	686	687	688	689	690	691	692	693	694	695	696	697	698	699	700	701	702	703	704	705	706	707	708	709	710	711	712	713	714	715	716	717	718	719	720	721	722	723	724	725	726	727	728	729	730	731	732	733	734	735	736	737	738	739	740	741	742	743	744	745	746	747	748	749	750	751	752	753	754	755	756	757	758	759	760	761	762	763	764	765	766	767	768	769	770	771	772	773	774	775	776	777	778	779	780	781	782	783	784	785	786	787	788	789	790	791	792	793	794	795	796	797	798	799	800	801	802	803	804	805	806	807	808	809	810	811	812	813	814	815	816	817	818	819	820	821	822	823	824	825	826	827	828	829	830	831	832	833	834	835	836	837	838	839	840	841	842	843	844	845	846	847	848	849	850	851	852	853	854	855	856	857	858	859	860	861	862	863	864	865	866	867	868	869	870	871	872	873	874	875	876	877	878	879	880	881	882	883	884	885	886	887	888	889	890	891	892	893	894	895	896	897	898	899	900	901	902	903	904	905	906	907	908	909	910	911	912	913	914	915	916	917	918	919	920	921	922	923	924	925	926	927	928	929	930	931	932	933	934	935	936	937	938	939	940	941	942	943	944	945	946	947	948	949	950	951	952	953	954	955	956	957	958	959	960	961	962	963	964	965	966	967	968	969	970	971	972	973	974	975	976	977	978	979	980	981	982	983	984	985	986	987	988	989	990	991	992	993	994	995	996	997	998	999	1000

The volume of one mole of any gas is 24 dm<sup>3</sup> at room temperature and pressure (r.t.p.).

Permission to reproduce items where third-party owned material protected by copyright is included has been sought and cleared where possible. Every reasonable effort has been made by the publisher (UCLES) to trace copyright holders, but if any items requiring clearance have unwittingly been included, the publisher will be pleased to make amends at the earliest possible opportunity.

University of Cambridge International Examinations is part of the Cambridge Assessment Group. Cambridge Assessment is the brand name of University of Cambridge Local Examinations Syndicate (UCLES), which is itself a department of the University of Cambridge.