



Cambridge IGCSE™

CANDIDATE
NAME

CENTRE
NUMBER

--	--	--	--	--

CANDIDATE
NUMBER

--	--	--	--



ADDITIONAL MATHEMATICS

0606/12

Paper 1

February/March 2021

2 hours

You must answer on the question paper.

No additional materials are needed.

INSTRUCTIONS

- Answer **all** questions.
- Use a black or dark blue pen. You may use an HB pencil for any diagrams or graphs.
- Write your name, centre number and candidate number in the boxes at the top of the page.
- Write your answer to each question in the space provided.
- Do **not** use an erasable pen or correction fluid.
- Do **not** write on any bar codes.
- You should use a calculator where appropriate.
- You must show all necessary working clearly; no marks will be given for unsupported answers from a calculator.
- Give non-exact numerical answers correct to 3 significant figures, or 1 decimal place for angles in degrees, unless a different level of accuracy is specified in the question.

INFORMATION

- The total mark for this paper is 80.
- The number of marks for each question or part question is shown in brackets [].

This document has **16** pages.

Mathematical Formulae**1. ALGEBRA***Quadratic Equation*

For the equation $ax^2 + bx + c = 0$,

$$x = \frac{-b \pm \sqrt{b^2 - 4ac}}{2a}$$

Binomial Theorem

$$(a+b)^n = a^n + \binom{n}{1}a^{n-1}b + \binom{n}{2}a^{n-2}b^2 + \dots + \binom{n}{r}a^{n-r}b^r + \dots + b^n$$

where n is a positive integer and $\binom{n}{r} = \frac{n!}{(n-r)!r!}$

Arithmetic series $u_n = a + (n-1)d$

$$S_n = \frac{1}{2}n(a+l) = \frac{1}{2}n\{2a + (n-1)d\}$$

Geometric series $u_n = ar^{n-1}$

$$S_n = \frac{a(1-r^n)}{1-r} \quad (r \neq 1)$$

$$S_\infty = \frac{a}{1-r} \quad (|r| < 1)$$

2. TRIGONOMETRY*Identities*

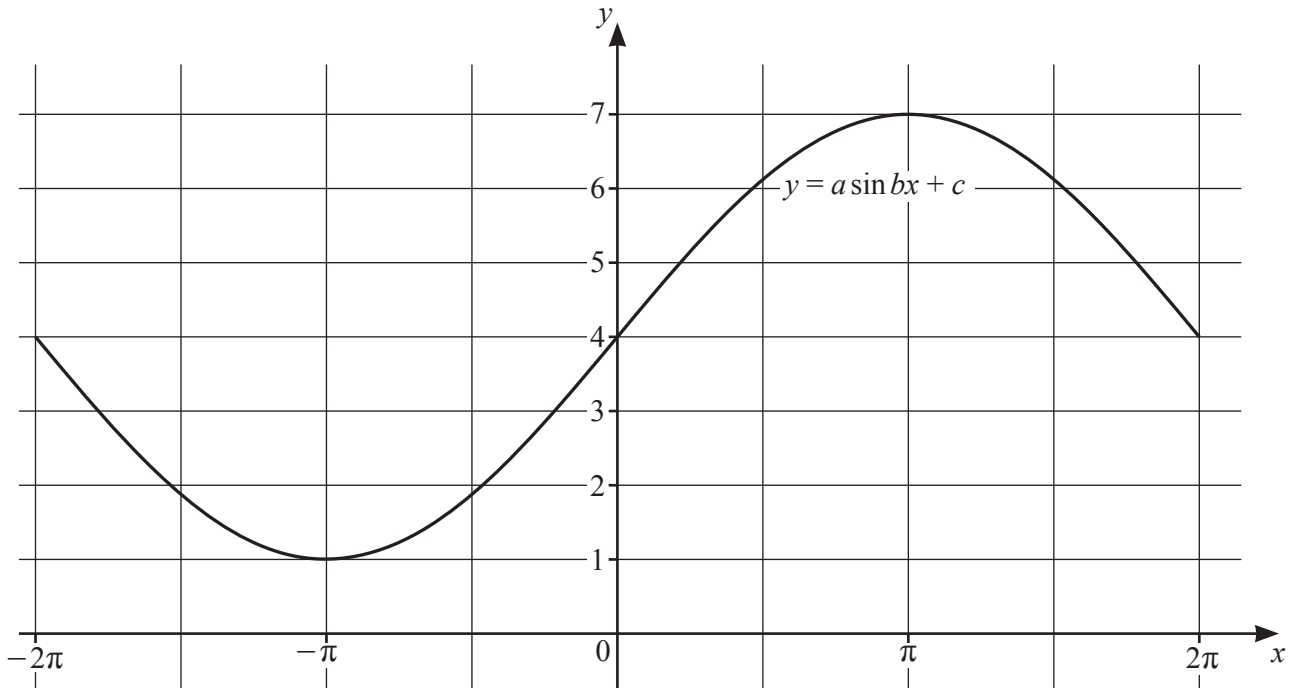
$$\begin{aligned}\sin^2 A + \cos^2 A &= 1 \\ \sec^2 A &= 1 + \tan^2 A \\ \operatorname{cosec}^2 A &= 1 + \cot^2 A\end{aligned}$$

Formulae for $\triangle ABC$

$$\begin{aligned}\frac{a}{\sin A} &= \frac{b}{\sin B} = \frac{c}{\sin C} \\ a^2 &= b^2 + c^2 - 2bc \cos A \\ \Delta &= \frac{1}{2}bc \sin A\end{aligned}$$

- 1 Find the exact solutions of the equation $3(\ln 5x)^2 + 2 \ln 5x - 1 = 0$. [4]

2



The diagram shows the graph of $y = a \sin bx + c$ where x is in radians and $-2\pi \leq x \leq 2\pi$, where a , b and c are positive constants. Find the value of each of a , b and c . [3]

3 The line AB is such that the points A and B have coordinates $(-4, 6)$ and $(2, 14)$ respectively.

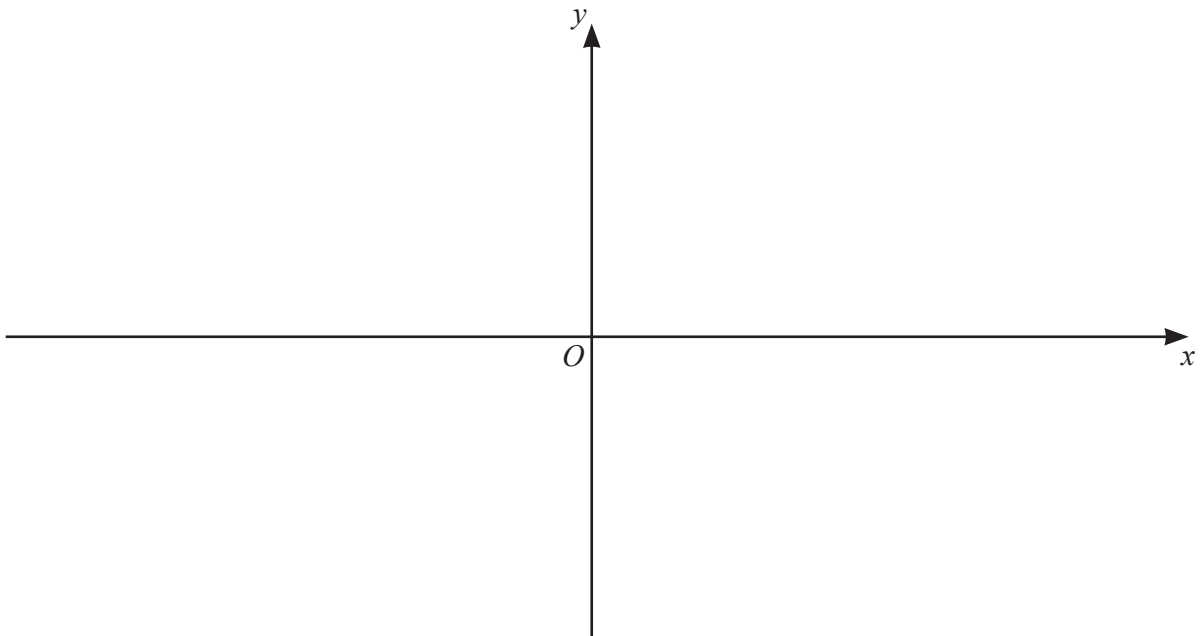
(a) The point C , with coordinates $(7, a)$ lies on the perpendicular bisector of AB . Find the value of a . [4]

(b) Given that the point D also lies on the perpendicular bisector of AB , find the coordinates of D such that the line AB bisects the line CD . [2]

- 4 (a) Show that $2x^2 + 5x - 3$ can be written in the form $a(x+b)^2 + c$, where a , b and c are constants. [3]

- (b) Hence write down the coordinates of the stationary point on the curve with equation $y = 2x^2 + 5x - 3$. [2]

- (c) On the axes below, sketch the graph of $y = |2x^2 + 5x - 3|$, stating the coordinates of the intercepts with the axes. [3]



- (d) Write down the value of k for which the equation $|2x^2 + 5x - 3| = k$ has exactly 3 distinct solutions. [1]

5 In this question all lengths are in kilometres and time is in hours.

Boat A sails, with constant velocity, from a point O with position vector $\begin{pmatrix} 0 \\ 0 \end{pmatrix}$. After 3 hours A is at the point with position vector $\begin{pmatrix} -12 \\ 9 \end{pmatrix}$.

(a) Find the position vector, \overrightarrow{OP} , of A at time t . [1]

At the same time as A sails from O , boat B sails from a point with position vector $\begin{pmatrix} 12 \\ 6 \end{pmatrix}$, with constant velocity $\begin{pmatrix} -5 \\ 8 \end{pmatrix}$.

(b) Find the position vector, \overrightarrow{OQ} , of B at time t . [1]

(c) Show that at time t $|\overrightarrow{PQ}|^2 = 26t^2 + 36t + 180$. [3]

(d) Hence show that A and B do not collide. [2]

6 (a) A geometric progression has first term 10 and sum to infinity 6.

(i) Find the common ratio of this progression.

[2]

(ii) Hence find the sum of the first 7 terms, giving your answer correct to 2 decimal places. [2]

(b) The first three terms of an arithmetic progression are $\log_x 3$, $\log_x(3^2)$, $\log_x(3^3)$.

(i) Find the common difference of this progression. [1]

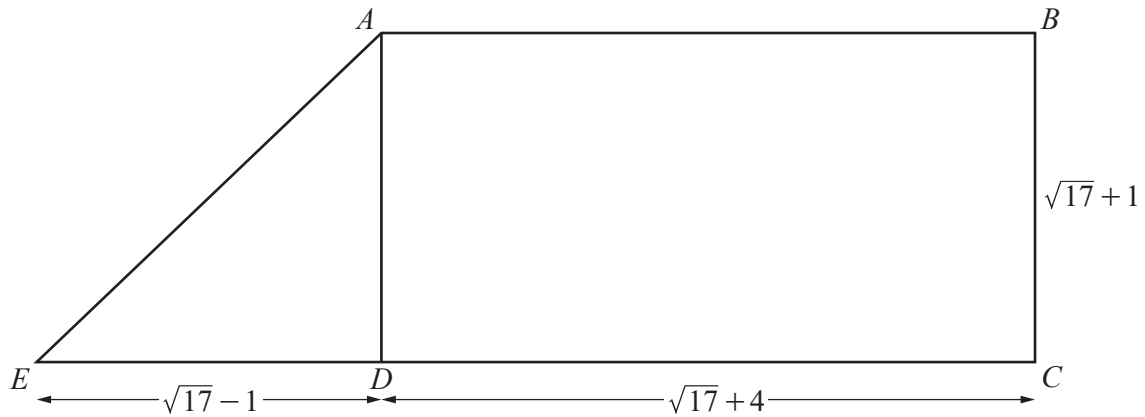
(ii) Find, in terms of n and $\log_x 3$, the sum to n terms of this progression. Simplify your answer. [2]

(iii) Given that the sum to n terms is $3081 \log_x 3$, find the value of n . [2]

(iv) Hence, given that the sum to n terms is also equal to 1027, find the value of x . [2]

7 DO NOT USE A CALCULATOR IN THIS QUESTION

In this question all lengths are in centimetres.



The diagram shows a trapezium $ABCDE$ such that AB is parallel to EC and $ABCD$ is a rectangle. It is given that $BC = \sqrt{17} + 1$, $ED = \sqrt{17} - 1$ and $DC = \sqrt{17} + 4$.

- (a) Find the perimeter of the trapezium, giving your answer in the form $a + b\sqrt{17}$, where a and b are integers. [3]

- (b) Find the area of the trapezium, giving your answer in the form $c + d\sqrt{17}$, where c and d are integers. [2]

(c) Find $\tan AED$, giving your answer in the form $\frac{e+f\sqrt{17}}{8}$, where e and f are integers. [2]

(d) Hence show that $\sec^2 AED = \frac{81+9\sqrt{17}}{32}$. [2]

8 (a) (i) Show that $\sin x \tan x + \cos x = \sec x$.

[3]

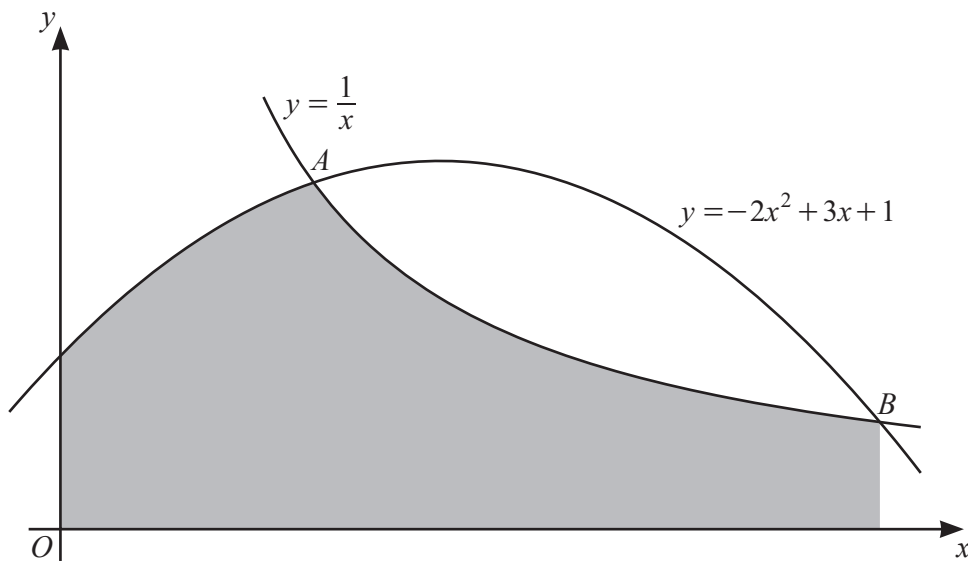
(ii) Hence solve the equation $\sin \frac{\theta}{2} \tan \frac{\theta}{2} + \cos \frac{\theta}{2} = 4$ for $0 \leq \theta \leq 4\pi$, where θ is in radians. [4]

(b) Solve the equation $\cot(y + 38^\circ) = \sqrt{3}$ for $0^\circ \leq y \leq 360^\circ$.

[3]

9 The polynomial $p(x) = 2x^3 - 3x^2 - x + 1$ has a factor $2x - 1$.

(a) Find $p(x)$ in the form $(2x - 1)q(x)$, where $q(x)$ is a quadratic factor. [2]



The diagram shows the graph of $y = \frac{1}{x}$ for $x > 0$, and the graph of $y = -2x^2 + 3x + 1$. The curves intersect at the points A and B .

(b) Using your answer to **part (a)**, find the exact x -coordinate of A and of B . [4]

(c) Find the exact area of the shaded region.

[6]

Question 10 is printed on the next page.

10 A curve has equation $y = \frac{(2x^2 + 10)^{\frac{3}{2}}}{x-1}$ for $x > 1$.

(a) Show that $\frac{dy}{dx}$ can be written in the form $\frac{(2x^2 + 10)^{\frac{1}{2}}}{(x-1)^2}(Ax^2 + Bx + C)$, where A , B and C are integers. [5]

(b) Show that, for $x > 1$, the curve has exactly one stationary point. Find the value of x at this stationary point. [4]

Permission to reproduce items where third-party owned material protected by copyright is included has been sought and cleared where possible. Every reasonable effort has been made by the publisher (UCLES) to trace copyright holders, but if any items requiring clearance have unwittingly been included, the publisher will be pleased to make amends at the earliest possible opportunity.

To avoid the issue of disclosure of answer-related information to candidates, all copyright acknowledgements are reproduced online in the Cambridge Assessment International Education Copyright Acknowledgements Booklet. This is produced for each series of examinations and is freely available to download at www.cambridgeinternational.org after the live examination series.

Cambridge Assessment International Education is part of the Cambridge Assessment Group. Cambridge Assessment is the brand name of the University of Cambridge Local Examinations Syndicate (UCLES), which itself is a department of the University of Cambridge.