

Centre Number	Candidate Number	Name
---------------	------------------	------

CAMBRIDGE INTERNATIONAL EXAMINATIONS
International General Certificate of Secondary Education

COMBINED SCIENCE

0653/02

Paper 2

October/November 2003

1 hour

Candidates answer on the Question Paper.
No Additional Materials are required.

READ THESE INSTRUCTIONS FIRST

Write your Centre number, candidate number and name on all the work you hand in.
Write in dark blue or black pen in the spaces provided on the Question Paper.
You may use a soft pencil for any diagrams, graphs, tables or rough working.
Do not use staples, paper clips, highlighters, glue or correction fluid.

Answer **all** questions.

At the end of the examination, fasten all your work securely together.

The number of marks is given in brackets [] at the end of each question or part question.

A copy of the Periodic Table is printed on page 16.

For Examiner's Use	
1	
2	
3	
4	
5	
6	
7	
8	
9	
Total	

If you have been given a label, look at the details. If any details are incorrect or missing, please fill in your correct details in the space given at the top of this page.

Stick your personal label here, if provided.

This document consists of **15** printed pages and **1** blank pages.

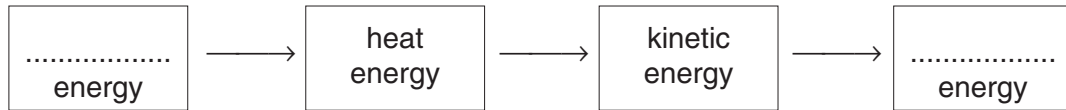


1 Windfarms are areas of land containing many wind turbines. Four thousand wind turbines can produce the same power as one coal-fired power station.

(a) (i) State the main energy change that takes place in a wind turbine.

..... energy → energy [1]

(ii) Complete the sequence of energy changes in a coal-fired power station.



[2]

(b) Wind power is said to be a renewable source of energy.

Explain what the term *renewable* means.

.....
.....[1]

(c) Nuclear fission is used to produce electricity in nuclear power stations. The Sun's energy is produced by nuclear fusion.

Explain the difference between nuclear fission and nuclear fusion.

.....
.....
.....[2]

2 A boy went to his doctor because he felt tired all the time.

His doctor took a sample of his blood. The doctor tested the blood. She found that the boy did not have enough red blood cells.

The doctor told the boy that he was suffering from anaemia. She explained to the boy that he should eat more iron in his diet.

(a) (i) What do red blood cells do?

.....
.....[1]

(ii) Explain why not having enough red blood cells made the boy feel tired.

.....
.....
.....[2]

(b) (i) Explain why eating more iron would help the boy to increase the number of red blood cells in his body.

.....
.....
.....[2]

(ii) The boy asked his doctor to tell him which kinds of foods he should eat, in order to get more iron. Name **two** foods that she might have suggested.

.....[2]

3 (a) (i) The formula of chlorine molecules is Cl_2 .

Explain what this formula means.

.....
[1]

(ii) An atom of chlorine has a proton number of 17 and a nucleon number of 35.

A diagram of this chlorine atom is shown in Fig. 3.1.
 Complete the labelling of the diagram.

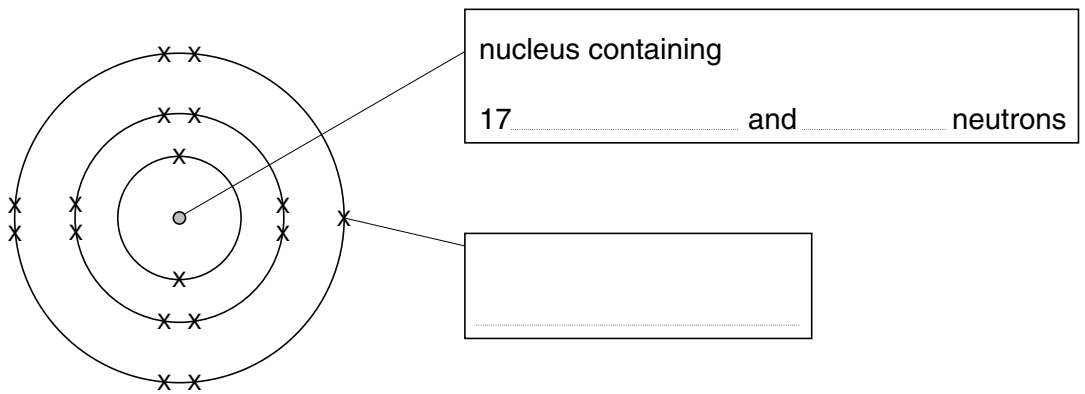


Fig. 3.1

[3]

(b) Explain why chlorine is sometimes used to treat drinking water before it is supplied to homes.

.....

[2]

4 Fig. 4.1 shows an electrical device.




Fig. 4.1

(a) Name this device.

.....[1]

(b) Calculate the output voltage. Show your working and state any formula that you use.

formula

working

..... volts [2]

(c) Electricity is transmitted for long distances through cables.

Why does the voltage need to be high for transmission over long distances?

.....

[2]

(d) An electricity supply is 240 V a.c. The frequency of the electricity supply is 50 Hz. Explain the meaning of the following terms.

(i) *a.c.*
[2]

(ii) *Hz*
[1]

5 The words on the left in Fig. 5.1 are ecological terms.

(a) Match each word with its definition by drawing a line between them. One has been done for you.

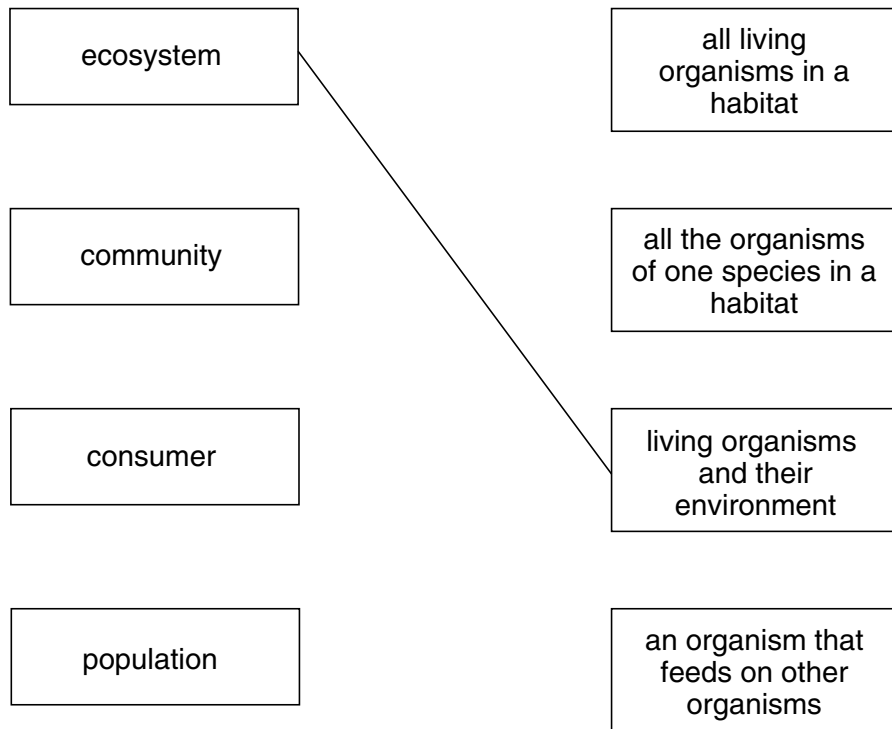


Fig. 5.1

[2]

- (b) A student investigated the population of snails in a wood. She collected 50 snails, and measured the shell length of each one. She also recorded the number of stripes on their shells.

Fig. 5.2 shows the graphs that she drew to display her results.

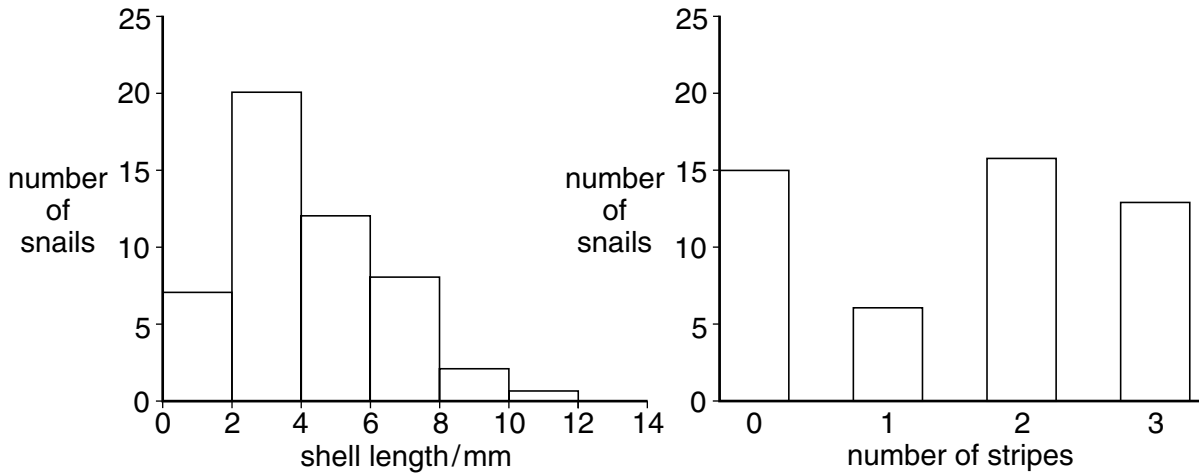


Fig. 5.2

- (i) The student thought that the variation in the length of the snail shells could be caused by their environment.

Suggest **one** environmental factor that could cause the variation in the length of the snail shells.

.....[1]

- (ii) The student thought that the variation in the number of stripes was probably caused by the snails' genes.


The student was able to keep the snails for many months in order to investigate this.

What should she do, and what result should she look for?

.....

[2]

- 6 In a car engine, fuel containing hydrocarbons reacts with oxygen from the air. The products of this reaction enter the air with the exhaust gases.



- (a) (i) Name the element that makes up nearly 79% of the air.
[1]
- (ii) The gas argon is present in air. Explain why argon does not react with the hydrocarbon fuel in the car engine.

[1]
- (iii) Explain why it is very dangerous to leave a car engine running inside a closed building.

[2]
- (b) The energy needed to launch a space shuttle is released when a mixture of hydrogen and oxygen react to form the compound water.
- (i) The symbolic equation for this reaction is shown below.
- $$2\text{H}_2 + \text{O}_2 \rightarrow 2\text{H}_2\text{O}$$
- This equation is said to be *balanced*. Explain what this means.

[1]
- (ii) Describe **one** way in which a mixture of two gaseous elements is different from a compound of the same elements.

[1]

(c) Suggest why the use of hydrogen as a car fuel would cause less air pollution than the use of hydrocarbon fuels.

.....

.....

.....

.....[2]

[Question 7 can be found on page 10]

- 7 Fig. 7.1 shows a racing car. It is designed to accelerate rapidly and to go very fast.




Fig. 7.1

- (a) The car took 1.2 hours to complete a race of 288 kilometres.

Calculate the average speed of the car in kilometres per hour.
Show your working and state any formula that you use.

formula

working

..... km/h [2]

(b) A speed/time graph for the car is shown in Fig. 7.2. It shows the motion of the car over a 26 second period.

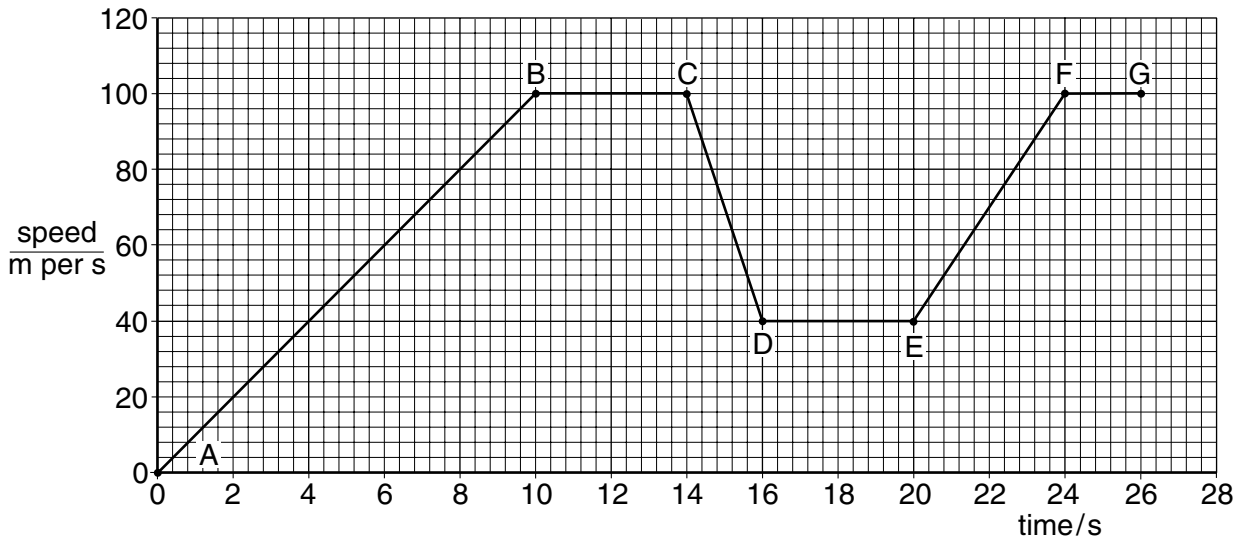


Fig. 7.2

(i) At which point is the car not moving?

.....[1]

(ii) State **one** part of the graph when the car was travelling at a constant speed. Explain your answer.

.....

[2]

(iii) State **one** part of the graph when the car was slowing down.

.....[1]

- 8 Fig. 8.1 shows the structure of the contents of the human thorax (chest).

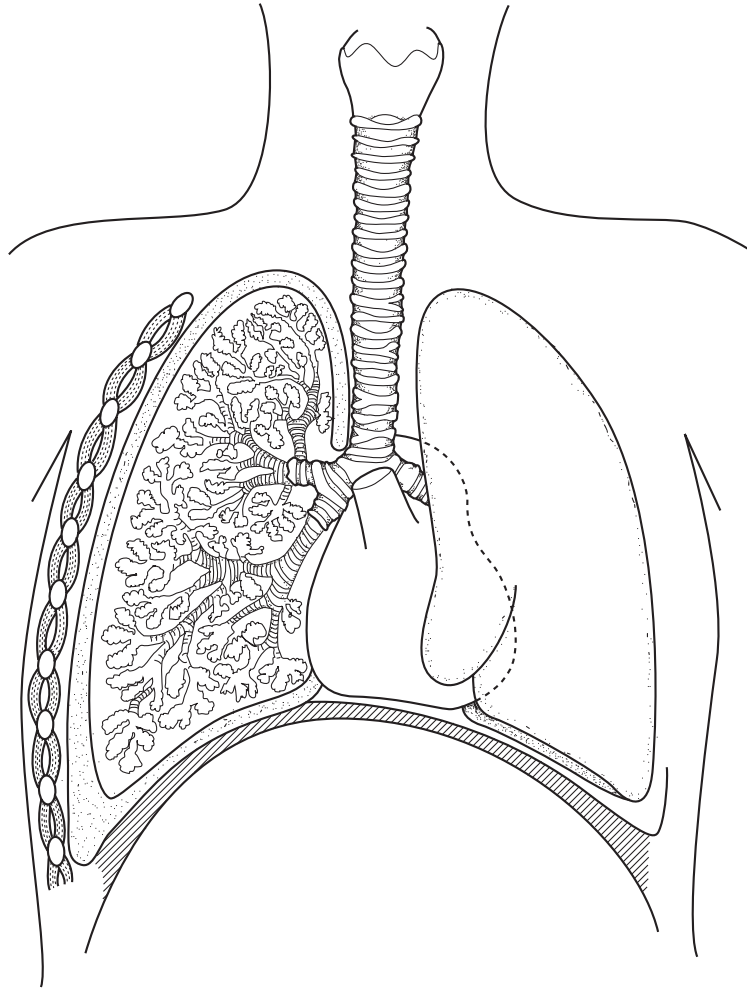


Fig. 8.1

- (a) On Fig. 8.1, draw label lines to each of the following structures and label them with the appropriate **letter**.

- A** a pleural membrane
- B** a bronchus
- C** the place where gas exchange takes place
- D** the heart

[4]

(b) The lining of the trachea contains

- goblet cells and
- cells with cilia.

(i) Describe how these cells help to keep the lungs clean.

.....
.....
.....
.....[2]

(ii) Explain how smoking can lead to the development of bronchitis.

.....
.....
.....
.....[2]

[Question 9 can be found on page 14]

- 9 (a) Choose words from the list below to complete the passage. Each word is used **once** or not at all.

aluminium	electrolyte	positive
anode	iron	solution
cathode	negative	sulphur

Electrolysis is a process used in industry to make important elements such as

In electrolysis a pair of electrodes dip into a liquid called an Metal ions have a charge and are attracted towards the [4]

- (b) (i) Describe **one** observation that would be made during the electrolysis of copper chloride solution.

.....
.....[1]

- (ii) In electrolysis, compounds are split into their elements.

Complete the word chemical equation for the reaction that occurs in the electrolysis of copper chloride solution.

copper chloride → [1]

