



**Cambridge International Examinations**  
Cambridge International General Certificate of Secondary Education

CANDIDATE  
NAME


--

CENTRE  
NUMBER

--	--	--	--	--

CANDIDATE  
NUMBER

--	--	--	--



**CO-ORDINATED SCIENCES**

Paper 3 Theory (Core)

**0654/31**

**May/June 2018**

**2 hours**

Candidates answer on the Question Paper.

No Additional Materials are required.

**READ THESE INSTRUCTIONS FIRST**

Write your Centre number, candidate number and name on all the work you hand in.

Write in dark blue or black pen.

You may use an HB pencil for any diagrams or graphs.

Do not use staples, paper clips, glue or correction fluid.

**DO NOT WRITE IN ANY BARCODES.**

Answer **all** questions.

Electronic calculators may be used.

You may lose marks if you do not show your working or if you do not use appropriate units.

A copy of the Periodic Table is printed on page 27.

At the end of the examination, fasten all your work securely together.

The number of marks is given in brackets [ ] at the end of each question or part question.

This document consists of **27** printed pages and **1** blank page.

1 Fig. 1.1 shows a diagram of a section through a heart.

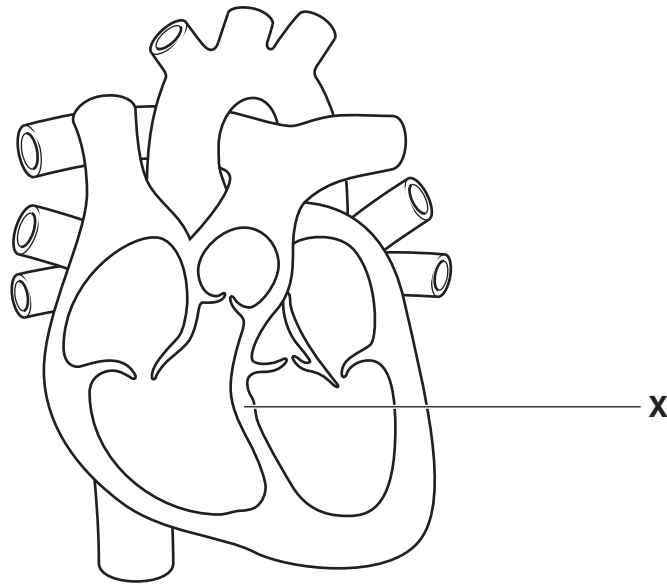


Fig. 1.1

(a) (i) Name the part labelled **X** on Fig. 1.1.

.....[1]

(ii) On Fig. 1.1, draw a label line and the letter **V** to show one of the ventricles of the heart.  
[1]

(b) Name the main blood vessel that transports blood from the heart to the lungs.

.....[1]

(c) Describe how the heart moves blood from the heart to the rest of the body.

.....  
.....  
.....[2]

(d) The boxes on the left show the components of blood.

The boxes on the right show the functions of these components.

Draw **one** line from each component of blood to its correct function.

component of blood	function
red blood cells	phagocytosis and antibody formation
white blood cells	haemoglobin and oxygen transport
platelets	transport of soluble nutrients, ions and hormones
plasma	clotting of blood

[2]

2 Aluminium is a metal and oxygen is a non-metal.

(a) (i) State **two** general **physical** properties of metals.

1 .....

2 .....

[2]

(ii) Complete the sentences using words from the list.

Each word may be used once, more than once or not at all.

- |                |                  |              |                 |
|----------------|------------------|--------------|-----------------|
| <b>atom</b>    | <b>electrons</b> | <b>five</b>  | <b>molecule</b> |
| <b>protons</b> | <b>six</b>       | <b>three</b> | <b>two</b>      |

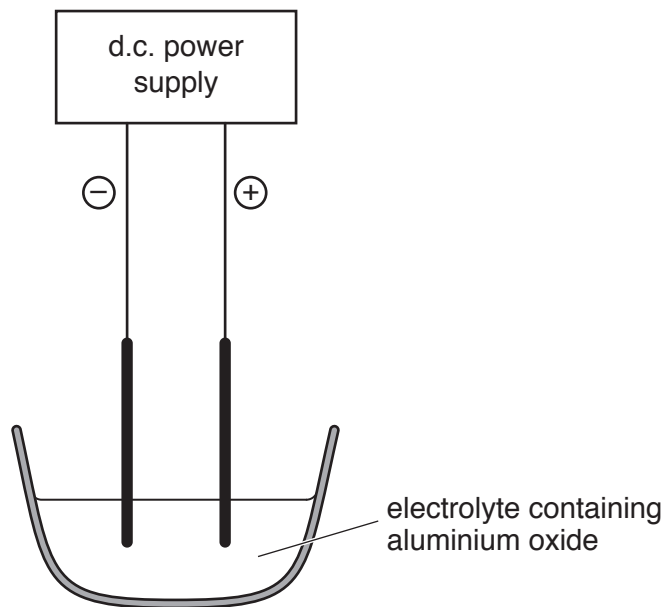
The formula of aluminium oxide,  $Al_2O_3$ , shows .....  
aluminium ions and ..... oxide ions.

There are fewer ..... in an aluminium ion,  $Al^{3+}$ , than there  
are in an aluminium .....

[3]

(b) Aluminium is formed at the cathode during the electrolysis of aluminium oxide.

Fig. 2.1 shows this process.



**Fig. 2.1**

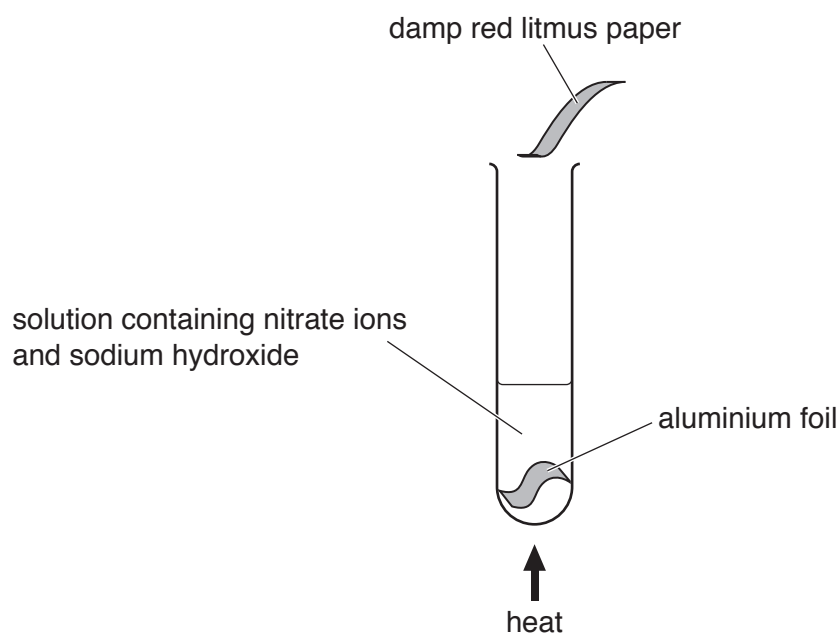
(i) On Fig. 2.1, label the cathode using the letter **C**.

[1]

(ii) Name the element that forms at the anode.

.....[1]

(c) Fig. 2.2 shows a chemical test for the presence of nitrate ions,  $\text{NO}_3^-$ .



**Fig. 2.2**

In this test, nitrate ions are reduced and a gaseous compound of nitrogen is released.

(i) State the meaning of the term *reduced*.

.....  
 ..... [1]

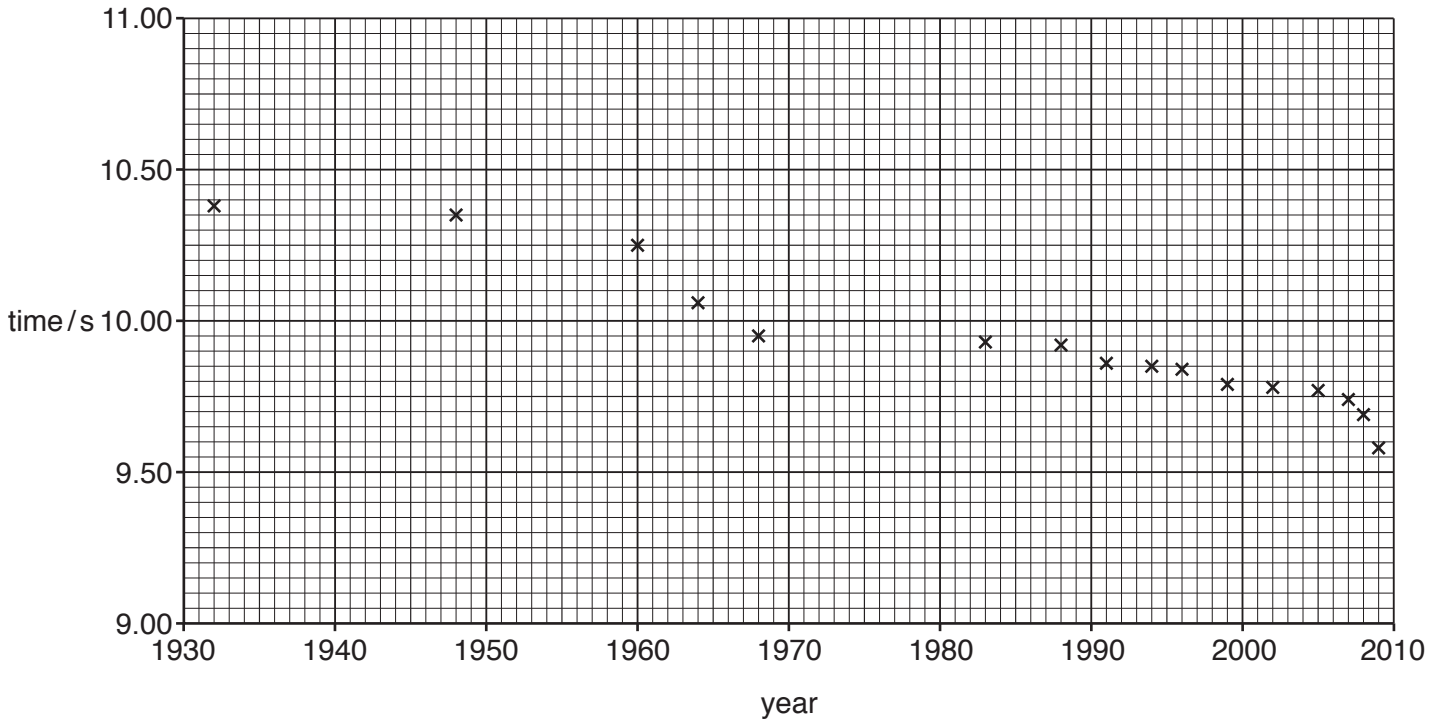
(ii) Name the compound of nitrogen that is released and describe its effect on the damp red litmus paper.

name .....

effect .....

[2]

- 3 (a) Fig. 3.1 is a graph showing how the time for the world record for the 100m sprint has decreased since 1930.



**Fig. 3.1**

- (i) State the world record time set in 1960.

..... s [1]

- (ii) In 2009, Usain Bolt ran 100 m in 9.58 seconds.

Calculate Usain Bolt's average speed in this race.

State the formula you use and show your working.

formula

working

average speed = ..... m/s [2]

- (iii) Complete the sentence below by choosing the correct forms of energy.

As an athlete runs, the ..... energy in the food he has eaten changes to ..... energy and thermal energy.

[2]

(b) An athlete trains on a running machine.

The running machine measures his power output.

The faster he runs, the greater his power output.

Explain why the athlete's power output is greater when he runs faster.

.....  
.....[1]

(c) Fig. 3.2 shows another athlete running in a long distance race.

She pours water over herself.

She is cooled by the evaporation of the water from her body.

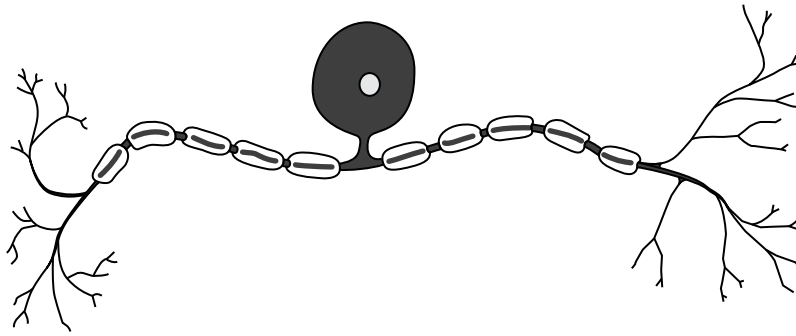


**Fig. 3.2**

Explain, in terms of particles, how the evaporation of water cools the athlete.

.....  
.....  
.....  
.....[2]

4 Fig. 4.1 shows a diagram of a cell in the body.



**Fig. 4.1**

(a) Name the cell in Fig. 4.1.

.....[2]

(b) The cell in Fig. 4.1 is involved in a reflex action.

Describe the pathway of a reflex arc from the initial stimulus to the response.

.....  
 .....  
 .....  
 .....  
 .....[3]

(c) Table 4.1 shows examples of different responses by the body.

Place a tick (✓) in the boxes to show **all** the responses that are reflex actions.

**Table 4.1**

coughing	
running	
sleeping	
sneezing	
sweating	
talking	

[3]



(d) Stimuli causing reflex actions can also result in the release of the hormone adrenaline.

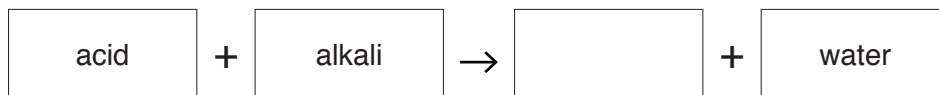
Describe the effects of the release of adrenaline on the body.

.....

.....

..... [2]

- 5 (a) (i) Complete the general equation for the reaction between an acid and an alkali.



[1]

- (ii) Name the type of chemical reaction in (a)(i).

.....[1]

- (b) Dilute hydrochloric acid reacts with potassium hydroxide solution.

- (i) Complete Table 5.1 by writing the numbers **1**, **7** and **13** to show the pH value of each liquid.

**Table 5.1**

liquid	pH
dilute hydrochloric acid	
potassium hydroxide solution	
water	

[1]

- (ii) Other than water, name the compound that is produced when hydrochloric acid reacts with potassium hydroxide.

.....[1]

- (iii) Describe how a student could show that the reaction between dilute hydrochloric acid and potassium hydroxide solution is exothermic.

.....

.....[1]

(c) A sample of air is collected near a road in a city.

Six of the gases contained in the sample are listed.

- carbon dioxide
- carbon monoxide
- nitrogen
- nitrogen dioxide
- oxygen
- water vapour

(i) State the gases in the list that are elements.

.....[1]

(ii) Explain why carbon dioxide is a compound and air is a mixture.

carbon dioxide .....

.....

air .....

.....

[2]

(iii) State **two** gases in the list that cause air pollution.

1 .....

2 .....

[2]

(iv) State **two** gases in the list that cause the rusting of iron.

1 .....

2 .....

[1]

6 (a) Fig. 6.1 shows the forces acting on a police car when it is travelling at a constant speed.

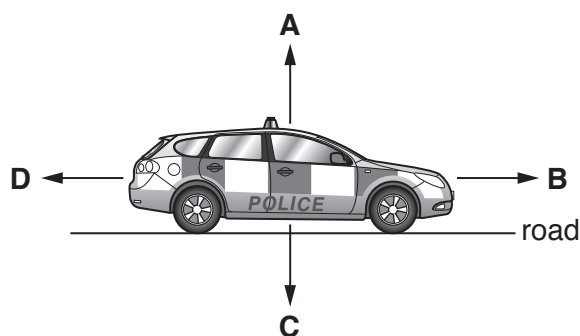


Fig. 6.1

Four forces, **A**, **B**, **C** and **D**, are shown.

(i) State which force, **A**, **B**, **C** or **D**, is the weight of the police car.

..... [1]

(ii) Compare the size and direction of forces **B** and **D** when the car is accelerating in a forwards direction.

.....  
 .....  
 ..... [2]

(iii) Forces can change the motion of an object.

State **one** other effect that a force can have on an object.

..... [1]

(iv) Name the unit of force.

..... [1]

(b) The police car uses a loud siren to alert people.

(i) State how the loudness of the sound of the siren changes when the amplitude of the sound waves emitted increases.

..... [1]

(ii) State how the pitch of the sound of the siren changes when the frequency of the sound waves emitted is reduced.

..... [1]

(c) Cars have rear view mirrors to help the drivers see behind the car.

A driver sees a taxi in his mirror as shown in Fig. 6.2.




Fig. 6.2

Use Fig. 6.2 to describe **two** characteristics of an image seen in a plane mirror apart from size.

- 1 .....
- .....
- 2 .....
- .....

[2]

(d) The bodywork of a car is usually made from steel.

The bodywork of some cars is made from aluminium.

Suggest a simple way of deciding whether the bodywork is made from steel or aluminium.

Explain your answer.

- .....
- ..... [1]

(e) The car rolls down a hill with the engine switched off.

State the energy transformation that is taking place.

from ..... energy to ..... energy [1]

7 (a) Alleles are different forms of genes.

Complete the sentences about genes using the words from the list.

Each word may be used once, more than once or not at all.

- alleles      carbohydrates      cell      chromosomes  
 DNA      nuclei      protein

Genes are found on ..... in the nuclei of cells. A gene is a length of ..... that is the unit of heredity and codes for a specific ..... A gene can be copied and passed on to the next generation. [3]

(b) Diagram **A** in Fig. 7.1 shows a person with an attached earlobe.

Diagram **B** in Fig. 7.1 shows a different person with an unattached earlobe.

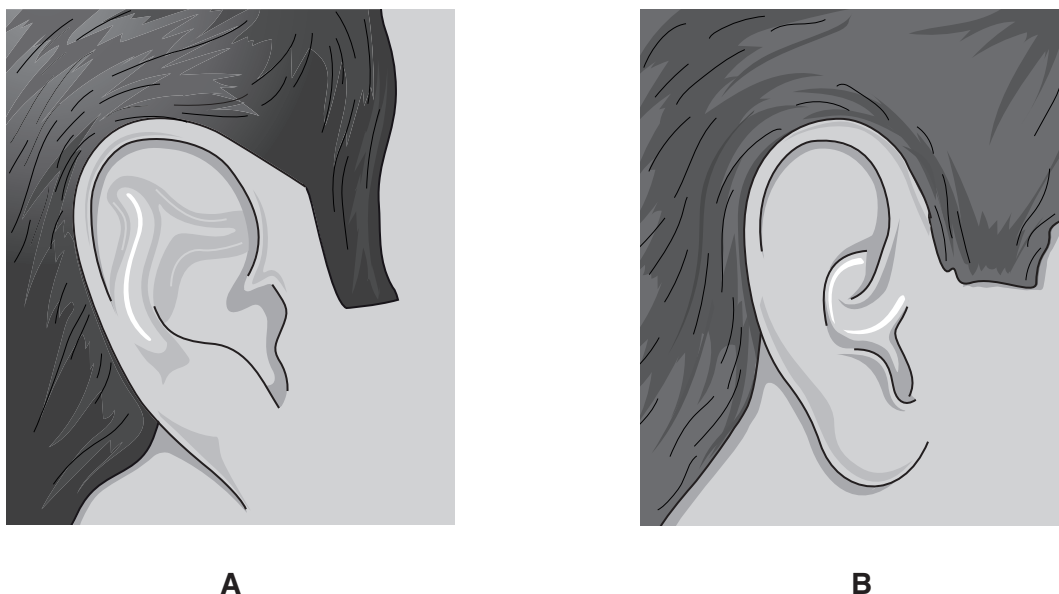


Fig. 7.1

The allele for attached earlobes (**e**) is recessive and the allele for unattached earlobes (**E**) is dominant.

One allele is inherited from the mother and one from the father.

- (i) State **all** the possible genotypes for the person in diagram **B** in Fig. 7.1. ....[2]
- (ii) Name the **terms** used to describe the genotype of the person in diagram **A** in Fig. 7.1. ....[2]

(c) In a population there are more people with unattached earlobes than attached earlobes.

Explain why there are more people with unattached earlobes.

.....

.....

..... [2]

- 8 Fig. 8.1 shows apparatus used by a student to investigate the reaction between excess dilute hydrochloric acid and a piece of limestone.

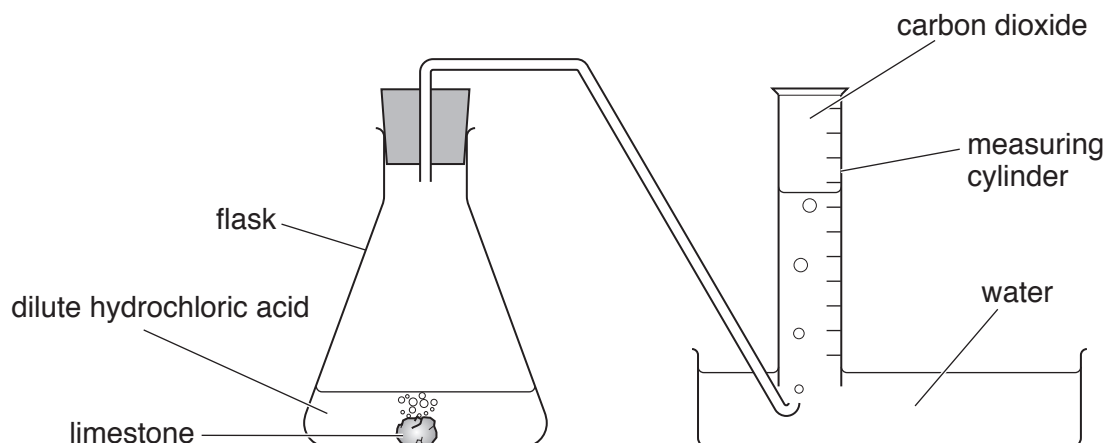


Fig. 8.1

- (a) Name the chemical compound in limestone that reacts with dilute hydrochloric acid to release carbon dioxide.
- .....[1]
- (b) The student measures the volume of carbon dioxide in the measuring cylinder every minute for seven minutes.

Her results are shown in Fig. 8.2.

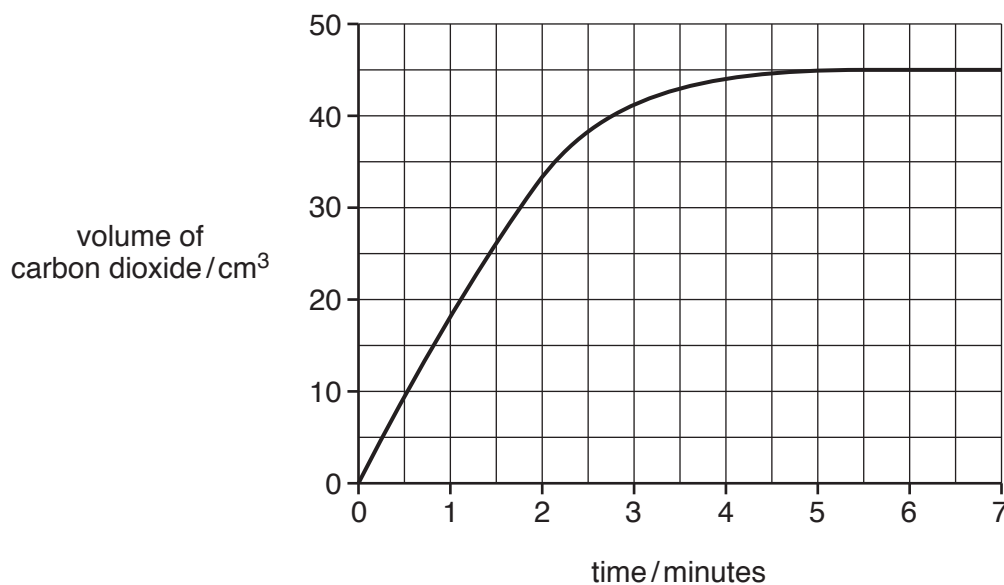


Fig. 8.2

- (i) Use Fig. 8.2 to find the volume of carbon dioxide released.

volume = ..... cm<sup>3</sup> [1]



(ii) The student repeats the reaction.

State **one** change she can make so that a greater volume of carbon dioxide is released.

.....[1]

(iii) State **two** changes the student can make to increase the rate of reaction.

1 .....

2 .....

[2]

(c) A white solid and a gas are produced when limestone is heated.

(i) Name the white solid and the gas.

white solid .....

gas .....

[2]

(ii) Explain why limestone is spread onto soil that is used for growing crops.

.....

.....

.....[2]

9 (a) Fig. 9.1 shows a heater in a classroom.

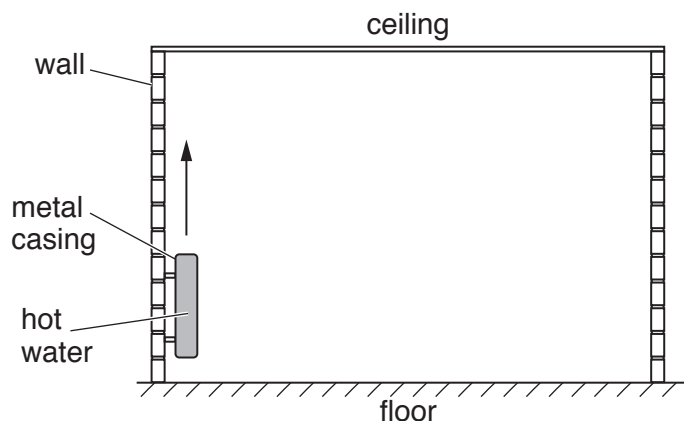


Fig. 9.1

The heater is filled with hot water.

(i) Name the method by which thermal energy passes through the metal casing of the heater.

.....[1]

(ii) The air around the heater is warmed. On Fig. 9.1, draw three arrows to show how the warmed air circulates around the classroom. One arrow has been drawn for you. [2]

(iii) Name the method of thermal energy transfer you have shown in (a)(ii).

.....[1]

(b) In a school, a bell is rung to indicate that a lesson has ended.

The bell produces sound waves that travel through the air.

(i) State why sound waves can travel through the air but cannot travel through outer space.

.....  
 .....[1]

(ii) A sound wave is an example of a longitudinal wave.

State **one** example of a transverse wave.

.....[1]

(c) In the school science laboratory, a teacher uses a radioactive isotope of americium.

(i) State the meaning of the term *isotope*.

.....  
.....  
.....[1]

(ii) Americium-241 decays by emitting  $\alpha$ -particles.

Describe the nature of  $\alpha$ -particles.

.....  
.....[2]

10 Fig. 10.1 shows the activity of some digestive enzymes at different pH values.

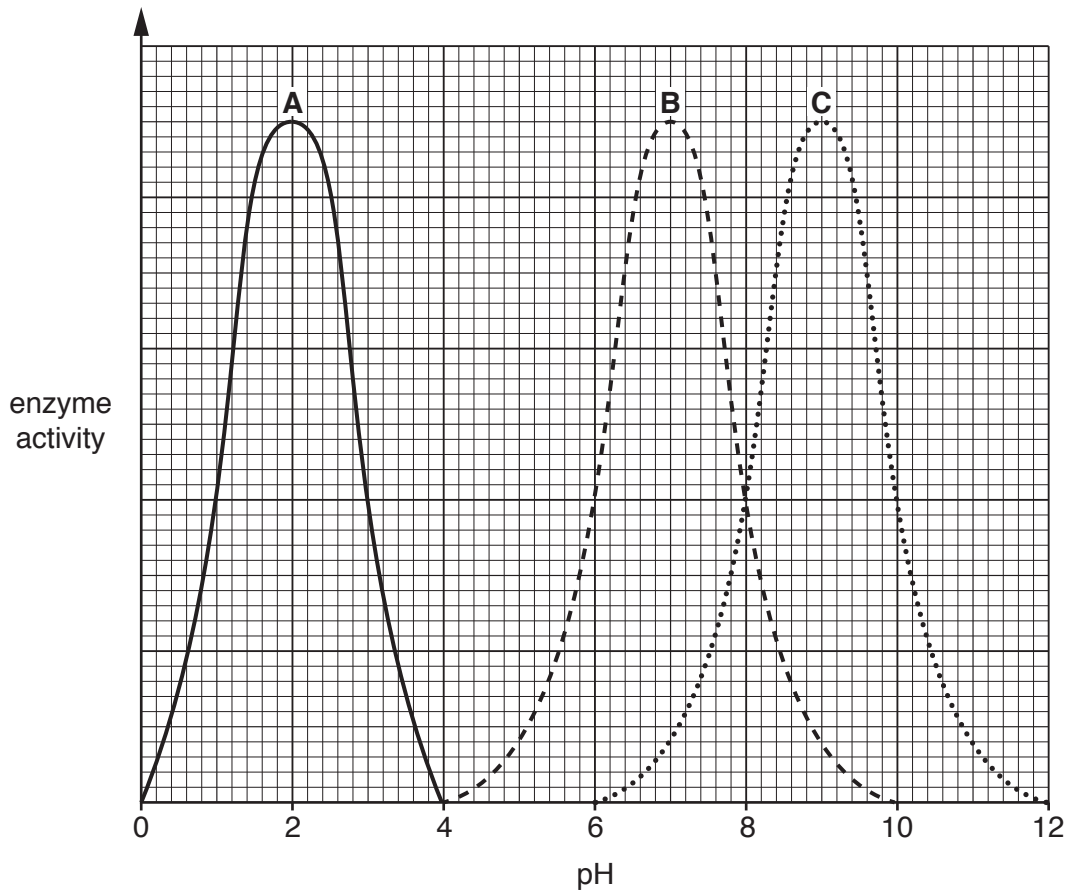


Fig. 10.1

(a) (i) Use Fig. 10.1 to state the optimum pH of enzyme B.

..... [1]

(ii) Use Fig. 10.1 to state a pH at which enzyme C does **not** work.

..... [1]

(b) Enzyme A is the enzyme protease.

(i) State where protease is secreted in the alimentary canal.

..... [1]

(ii) Name the products made by the action of protease.

..... [1]

(c) (i) Describe the function of enzymes in chemical digestion.

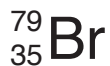
.....  
.....  
.....[2]

(ii) Apart from chemical digestion, state and describe **one** other action in the alimentary canal that aids digestion.

.....  
.....  
.....[2]

11 The chemical symbols of a chlorine atom and of a bromine atom are shown below.

The symbols include the atomic number and mass number of each atom.



(a) (i) State the number of neutrons in the bromine atom.

..... [1]

(ii) State the number of electrons in the chlorine atom.

..... [1]

(iii) State the number of the group in the Periodic Table that contains chlorine and bromine.

..... [1]

(b) (i) State the colour produced when chlorine reacts with colourless sodium bromide solution.

..... [1]

(ii) Explain your answer to (b)(i) using ideas about reactivity.

.....  
 .....  
 ..... [2]

(c) Hydrocarbon **Y** is mixed with bromine solution.

(i) State the meaning of the term *hydrocarbon*.

.....  
 ..... [2]

(ii) No colour change is observed when hydrocarbon **Y** is mixed with bromine solution.

State what this shows about hydrocarbon **Y**.

..... [1]

(d) Describe what happens when ethene molecules react to form poly(ethene).

.....  
 ..... [1]

12 (a) The frame of a bicycle can be painted using electrostatic paint spraying.

In electrostatic paint spraying, the surfaces being painted are given a negative electric charge.

The paint droplets leave the spray gun with a positive electric charge.

Fig. 12.1 shows part of the bicycle frame being painted.

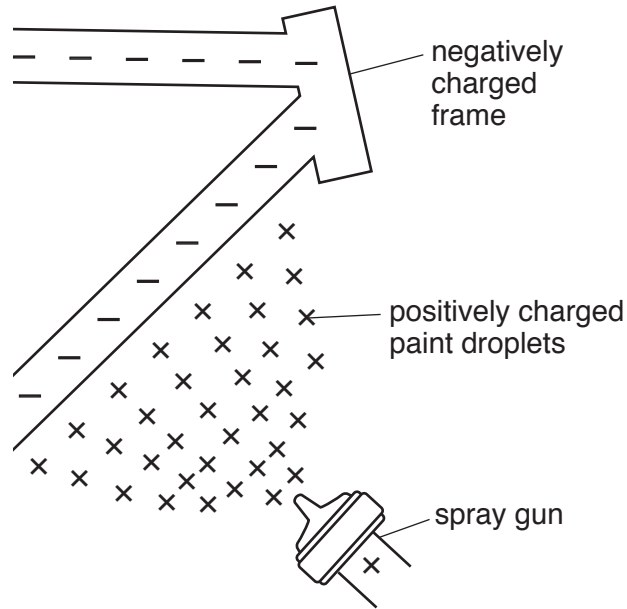


Fig. 12.1

(i) Explain why the positive charges on the paint droplets and the negative charges on the frame make sure that the paint droplets are attracted to the frame.

.....  
 .....[1]

(ii) Explain why the positive charges on the paint droplets make sure that the paint droplets spread evenly over the frame.

.....  
 .....[1]

(b) The air in a tyre of the bicycle warms up during a journey.

(i) Describe what happens to the molecules in the air inside the tyre as the air warms up.

.....  
 .....[1]

(ii) Describe how the molecules in the air in the tyres exert a pressure on the walls of the tyre.

.....  
 .....[1]

(c) The bicycle is left outside on a sunny day. Energy from the Sun heats the bicycle.

(i) State the method of energy transfer between the Sun and the Earth.

.....[1]

(ii) Name the part of the electromagnetic spectrum involved in thermal energy transfer from the Sun to the Earth and place it in the correct position in the incomplete electromagnetic spectrum in Fig. 12.2.

γ-rays			visible light			radio waves
--------	--	--	---------------	--	--	-------------

Fig. 12.2

[2]

(d) Fig. 12.3 shows the bicycle with a front lamp **A** and a rear lamp **B** powered by the same cells.




Fig. 12.3



Fig. 12.4 shows the circuit arrangement.

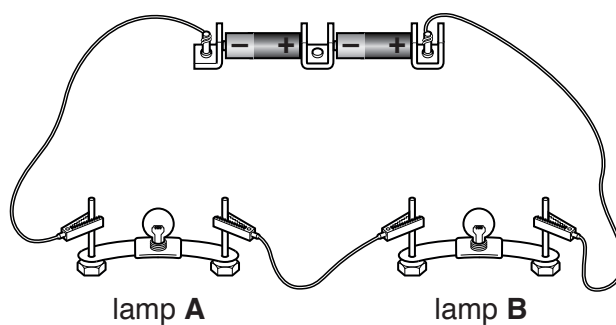


Fig. 12.4

- (i) Using the correct circuit symbols, draw a circuit diagram of this arrangement.

[2]

- (ii) Lamps **A** and **B** are identical. The current in each lamp is 0.4A and the total voltage supplied by the cells is 3.0V.

Calculate the resistance of lamp **A**.

State the formula you use and show your working.

formula

working

resistance = .....  $\Omega$  [3]

13 Fig. 13.1 shows a plant responding to a stimulus.




Fig. 13.1

(a) (i) Name the response shown by the plant in Fig. 13.1.

.....[1]

(ii) Describe the advantage to the plant of the response shown in Fig. 13.1.

.....  
.....  
.....[2]

(b) The plant in Fig. 13.1 has roots that are used for the uptake of water.

Describe how water is moved from the soil into the plant.

.....  
.....  
.....[2]

(c) The roots also take in mineral ions.

State the mineral ion that is required for the production of chlorophyll.

.....[1]

## The Periodic Table of Elements

		Group							
I	II	III	IV	V	VI	VII	VIII		
3 Li lithium 7	4 Be beryllium 9	1 H hydrogen 1	5 B boron 11	6 C carbon 12	7 N nitrogen 14	8 O oxygen 16	9 F fluorine 19	10 Ne neon 20	
11 Na sodium 23	12 Mg magnesium 24	<b>Key</b> atomic number atomic symbol name relative atomic mass		13 Al aluminium 27	14 Si silicon 28	15 P phosphorus 31	16 S sulfur 32	17 Cl chlorine 35.5	18 Ar argon 40
19 K potassium 39	20 Ca calcium 40	21 Sc scandium 45	22 Ti titanium 48	23 V vanadium 51	24 Cr chromium 52	25 Mn manganese 55	26 Fe iron 56	27 Co cobalt 59	28 Ni nickel 59
37 Rb rubidium 85	38 Sr strontium 88	39 Y yttrium 89	40 Zr zirconium 91	41 Nb niobium 93	42 Mo molybdenum 96	43 Tc technetium —	44 Ru ruthenium 101	45 Rh rhodium 103	46 Pd palladium 106
55 Cs caesium 133	56 Ba barium 137	57–71 lanthanoids	72 Hf hafnium 178	73 Ta tantalum 181	74 W tungsten 184	75 Re rhenium 186	76 Os osmium 190	77 Ir iridium 192	78 Pt platinum 195
87 Fr francium —	88 Ra radium —	89–103 actinoids	104 Rf rutherfordium —	105 Db dubnium —	106 Sg seaborgium —	107 Bh bohrium —	108 Hs hassium —	109 Mt meitnerium —	110 Ds darmstadtium —
			111 Rg roentgenium —	112 Cn copernicium —	113 Nh nihonium —	114 Fl flerovium —	115 Mc moscovium —	116 Lv livermorium —	117 Ts tennessine —
			118 Og oganesson —	119 Uu unbinilium —	120 Uub unbinilium —	121 Uut unbinilium —	122 Uuq unbinilium —	123 Uuq unbinilium —	124 Uuq unbinilium —
			125 Uup unbinilium —	126 Uuq unbinilium —	127 Uuq unbinilium —	128 Uuq unbinilium —	129 Uuq unbinilium —	130 Uuq unbinilium —	131 Uuq unbinilium —
			132 Uuq unbinilium —	133 Uuq unbinilium —	134 Uuq unbinilium —	135 Uuq unbinilium —	136 Uuq unbinilium —	137 Uuq unbinilium —	138 Uuq unbinilium —
			139 Uuq unbinilium —	140 Uuq unbinilium —	141 Uuq unbinilium —	142 Uuq unbinilium —	143 Uuq unbinilium —	144 Uuq unbinilium —	145 Uuq unbinilium —
			146 Uuq unbinilium —	147 Uuq unbinilium —	148 Uuq unbinilium —	149 Uuq unbinilium —	150 Uuq unbinilium —	151 Uuq unbinilium —	152 Uuq unbinilium —
			153 Uuq unbinilium —	154 Uuq unbinilium —	155 Uuq unbinilium —	156 Uuq unbinilium —	157 Uuq unbinilium —	158 Uuq unbinilium —	159 Uuq unbinilium —
			160 Uuq unbinilium —	161 Uuq unbinilium —	162 Uuq unbinilium —	163 Uuq unbinilium —	164 Uuq unbinilium —	165 Uuq unbinilium —	166 Uuq unbinilium —
			167 Uuq unbinilium —	168 Uuq unbinilium —	169 Uuq unbinilium —	170 Uuq unbinilium —	171 Uuq unbinilium —	172 Uuq unbinilium —	173 Uuq unbinilium —
			174 Uuq unbinilium —	175 Uuq unbinilium —	176 Uuq unbinilium —	177 Uuq unbinilium —	178 Uuq unbinilium —	179 Uuq unbinilium —	180 Uuq unbinilium —
			181 Uuq unbinilium —	182 Uuq unbinilium —	183 Uuq unbinilium —	184 Uuq unbinilium —	185 Uuq unbinilium —	186 Uuq unbinilium —	187 Uuq unbinilium —
			188 Uuq unbinilium —	189 Uuq unbinilium —	190 Uuq unbinilium —	191 Uuq unbinilium —	192 Uuq unbinilium —	193 Uuq unbinilium —	194 Uuq unbinilium —
			195 Uuq unbinilium —	196 Uuq unbinilium —	197 Uuq unbinilium —	198 Uuq unbinilium —	199 Uuq unbinilium —	200 Uuq unbinilium —	201 Uuq unbinilium —
			202 Uuq unbinilium —	203 Uuq unbinilium —	204 Uuq unbinilium —	205 Uuq unbinilium —	206 Uuq unbinilium —	207 Uuq unbinilium —	208 Uuq unbinilium —
			209 Uuq unbinilium —	210 Uuq unbinilium —	211 Uuq unbinilium —	212 Uuq unbinilium —	213 Uuq unbinilium —	214 Uuq unbinilium —	215 Uuq unbinilium —
			216 Uuq unbinilium —	217 Uuq unbinilium —	218 Uuq unbinilium —	219 Uuq unbinilium —	220 Uuq unbinilium —	221 Uuq unbinilium —	222 Uuq unbinilium —
			223 Uuq unbinilium —	224 Uuq unbinilium —	225 Uuq unbinilium —	226 Uuq unbinilium —	227 Uuq unbinilium —	228 Uuq unbinilium —	229 Uuq unbinilium —
			230 Uuq unbinilium —	231 Uuq unbinilium —	232 Uuq unbinilium —	233 Uuq unbinilium —	234 Uuq unbinilium —	235 Uuq unbinilium —	236 Uuq unbinilium —
			237 Uuq unbinilium —	238 Uuq unbinilium —	239 Uuq unbinilium —	240 Uuq unbinilium —	241 Uuq unbinilium —	242 Uuq unbinilium —	243 Uuq unbinilium —
			244 Uuq unbinilium —	245 Uuq unbinilium —	246 Uuq unbinilium —	247 Uuq unbinilium —	248 Uuq unbinilium —	249 Uuq unbinilium —	250 Uuq unbinilium —
			251 Uuq unbinilium —	252 Uuq unbinilium —	253 Uuq unbinilium —	254 Uuq unbinilium —	255 Uuq unbinilium —	256 Uuq unbinilium —	257 Uuq unbinilium —
			258 Uuq unbinilium —	259 Uuq unbinilium —	260 Uuq unbinilium —	261 Uuq unbinilium —	262 Uuq unbinilium —	263 Uuq unbinilium —	264 Uuq unbinilium —
			265 Uuq unbinilium —	266 Uuq unbinilium —	267 Uuq unbinilium —	268 Uuq unbinilium —	269 Uuq unbinilium —	270 Uuq unbinilium —	271 Uuq unbinilium —
			272 Uuq unbinilium —	273 Uuq unbinilium —	274 Uuq unbinilium —	275 Uuq unbinilium —	276 Uuq unbinilium —	277 Uuq unbinilium —	278 Uuq unbinilium —
			279 Uuq unbinilium —	280 Uuq unbinilium —	281 Uuq unbinilium —	282 Uuq unbinilium —	283 Uuq unbinilium —	284 Uuq unbinilium —	285 Uuq unbinilium —
			286 Uuq unbinilium —	287 Uuq unbinilium —	288 Uuq unbinilium —	289 Uuq unbinilium —	290 Uuq unbinilium —	291 Uuq unbinilium —	292 Uuq unbinilium —
			293 Uuq unbinilium —	294 Uuq unbinilium —	295 Uuq unbinilium —	296 Uuq unbinilium —	297 Uuq unbinilium —	298 Uuq unbinilium —	299 Uuq unbinilium —
			300 Uuq unbinilium —	301 Uuq unbinilium —	302 Uuq unbinilium —	303 Uuq unbinilium —	304 Uuq unbinilium —	305 Uuq unbinilium —	306 Uuq unbinilium —
			307 Uuq unbinilium —	308 Uuq unbinilium —	309 Uuq unbinilium —	310 Uuq unbinilium —	311 Uuq unbinilium —	312 Uuq unbinilium —	313 Uuq unbinilium —
			314 Uuq unbinilium —	315 Uuq unbinilium —	316 Uuq unbinilium —	317 Uuq unbinilium —	318 Uuq unbinilium —	319 Uuq unbinilium —	320 Uuq unbinilium —
			321 Uuq unbinilium —	322 Uuq unbinilium —	323 Uuq unbinilium —	324 Uuq unbinilium —	325 Uuq unbinilium —	326 Uuq unbinilium —	327 Uuq unbinilium —
			328 Uuq unbinilium —	329 Uuq unbinilium —	330 Uuq unbinilium —	331 Uuq unbinilium —	332 Uuq unbinilium —	333 Uuq unbinilium —	334 Uuq unbinilium —
			335 Uuq unbinilium —	336 Uuq unbinilium —	337 Uuq unbinilium —	338 Uuq unbinilium —	339 Uuq unbinilium —	340 Uuq unbinilium —	341 Uuq unbinilium —
			342 Uuq unbinilium —	343 Uuq unbinilium —	344 Uuq unbinilium —	345 Uuq unbinilium —	346 Uuq unbinilium —	347 Uuq unbinilium —	348 Uuq unbinilium —
			349 Uuq unbinilium —	350 Uuq unbinilium —	351 Uuq unbinilium —	352 Uuq unbinilium —	353 Uuq unbinilium —	354 Uuq unbinilium —	355 Uuq unbinilium —
			356 Uuq unbinilium —	357 Uuq unbinilium —	358 Uuq unbinilium —	359 Uuq unbinilium —	360 Uuq unbinilium —	361 Uuq unbinilium —	362 Uuq unbinilium —
			363 Uuq unbinilium —	364 Uuq unbinilium —	365 Uuq unbinilium —	366 Uuq unbinilium —	367 Uuq unbinilium —	368 Uuq unbinilium —	369 Uuq unbinilium —
			370 Uuq unbinilium —	371 Uuq unbinilium —	372 Uuq unbinilium —	373 Uuq unbinilium —	374 Uuq unbinilium —	375 Uuq unbinilium —	376 Uuq unbinilium —
			377 Uuq unbinilium —	378 Uuq unbinilium —	379 Uuq unbinilium —	380 Uuq unbinilium —	381 Uuq unbinilium —	382 Uuq unbinilium —	383 Uuq unbinilium —
			384 Uuq unbinilium —	385 Uuq unbinilium —	386 Uuq unbinilium —	387 Uuq unbinilium —	388 Uuq unbinilium —	389 Uuq unbinilium —	390 Uuq unbinilium —
			391 Uuq unbinilium —	392 Uuq unbinilium —	393 Uuq unbinilium —	394 Uuq unbinilium —	395 Uuq unbinilium —	396 Uuq unbinilium —	397 Uuq unbinilium —
			398 Uuq unbinilium —	399 Uuq unbinilium —	400 Uuq unbinilium —	401 Uuq unbinilium —	402 Uuq unbinilium —	403 Uuq unbinilium —	404 Uuq unbinilium —
			405 Uuq unbinilium —	406 Uuq unbinilium —	407 Uuq unbinilium —	408 Uuq unbinilium —	409 Uuq unbinilium —	410 Uuq unbinilium —	411 Uuq unbinilium —
			412 Uuq unbinilium —	413 Uuq unbinilium —	414 Uuq unbinilium —	415 Uuq unbinilium —	416 Uuq unbinilium —	417 Uuq unbinilium —	418 Uuq unbinilium —
			419 Uuq unbinilium —	420 Uuq unbinilium —	421 Uuq unbinilium —	422 Uuq unbinilium —	423 Uuq unbinilium —	424 Uuq unbinilium —	425 Uuq unbinilium —
			426 Uuq unbinilium —	427 Uuq unbinilium —	428 Uuq unbinilium —	429 Uuq unbinilium —	430 Uuq unbinilium —	431 Uuq unbinilium —	432 Uuq unbinilium —
			433 Uuq unbinilium —	434 Uuq unbinilium —	435 Uuq unbinilium —	436 Uuq unbinilium —	437 Uuq unbinilium —	438 Uuq unbinilium —	439 Uuq unbinilium —
			440 Uuq unbinilium —	441 Uuq unbinilium —	442 Uuq unbinilium —	443 Uuq unbinilium —	444 Uuq unbinilium —	445 Uuq unbinilium —	446 Uuq unbinilium —
			447 Uuq unbinilium —	448 Uuq unbinilium —	449 Uuq unbinilium —	450 Uuq unbinilium —	451 Uuq unbinilium —	452 Uuq unbinilium —	453 Uuq unbinilium —
			454 Uuq unbinilium —	455 Uuq unbinilium —	456 Uuq unbinilium —	457 Uuq unbinilium —	458 Uuq unbinilium —	459 Uuq unbinilium —	460 Uuq unbinilium —
			461 Uuq unbinilium —	462 Uuq unbinilium —	463 Uuq unbinilium —	464 Uuq unbinilium —	465 Uuq unbinilium —	466 Uuq unbinilium —	467 Uuq unbinilium —
			468 Uuq unbinilium —	469 Uuq unbinilium —	470 Uuq unbinilium —	471 Uuq unbinilium —	472 Uuq unbinilium —	473 Uuq unbinilium —	474 Uuq unbinilium —
			475 Uuq unbinilium —	476 Uuq unbinilium —	477 Uuq unbinilium —	478 Uuq unbinilium —	479 Uuq unbinilium —	480 Uuq unbinilium —	481 Uuq unbinilium —
			482 Uuq unbinilium —	483 Uuq unbinilium —	484 Uuq unbinilium —	485 Uuq unbinilium —	486 Uuq unbinilium —	487 Uuq unbinilium —	488 Uuq unbinilium —
			489 Uuq unbinilium —	490 Uuq unbinilium —	491 Uuq unbinilium —	492 Uuq unbinilium —	493 Uuq unbinilium —	494 Uuq unbinilium —	495 Uuq unbinilium —
			496 Uuq unbinilium —	497 Uuq unbinilium —	498 Uuq unbinilium —	499 Uuq unbinilium —	500 Uuq unbinilium —	501 Uuq unbinilium —	502 Uuq unbinilium —
			503 Uuq unbinilium —	504 Uuq unbinilium —	505 Uuq unbinilium —	506 Uuq unbinilium —	507 Uuq unbinilium —	508 Uuq unbinilium —	509 Uuq unbinilium —
			510 Uuq unbinilium —	511 Uuq unbinilium —	512 Uuq unbinilium —	513 Uuq unbinilium —	514 Uuq unbinilium —	515 Uuq unbinilium —	516 Uuq unbinilium —
			517 Uuq unbinilium —	518 Uuq unbinilium —	519 Uuq unbinilium —	520 Uuq unbinilium —	521 Uuq unbinilium —	522 Uuq unbinilium —	523 Uuq unbinilium —
			524 Uuq unbinilium —	525 Uuq unbinilium —	526 Uuq unbinilium —	527 Uuq unbinilium —	528 Uuq unbinilium —	529 Uuq unbinilium —	530 Uuq unbinilium —

**BLANK PAGE**

---

Permission to reproduce items where third-party owned material protected by copyright is included has been sought and cleared where possible. Every reasonable effort has been made by the publisher (UCLES) to trace copyright holders, but if any items requiring clearance have unwittingly been included, the publisher will be pleased to make amends at the earliest possible opportunity.

To avoid the issue of disclosure of answer-related information to candidates, all copyright acknowledgements are reproduced online in the Cambridge International Examinations Copyright Acknowledgements Booklet. This is produced for each series of examinations and is freely available to download at [www.cie.org.uk](http://www.cie.org.uk) after the live examination series.

Cambridge International Examinations is part of the Cambridge Assessment Group. Cambridge Assessment is the brand name of University of Cambridge Local Examinations Syndicate (UCLES), which is itself a department of the University of Cambridge.