



UNIVERSITY OF CAMBRIDGE INTERNATIONAL EXAMINATIONS  
International General Certificate of Secondary Education

CANDIDATE  
NAME

CENTRE  
NUMBER

--	--	--	--	--

CANDIDATE  
NUMBER

--	--	--	--



**TRAVEL AND TOURISM**

**0471/23**

Alternative to Coursework

**October/November 2013**

**2 hours 30 minutes**

Candidates answer on the Question Paper.

No Additional Materials are required.

**READ THESE INSTRUCTIONS FIRST**

Write your Centre number, candidate number and name on all the work you hand in.

Write in dark blue or black pen.

You may use a soft pencil for any diagrams, graphs or rough working.

Do not use staples, paper clips, highlighters, glue or correction fluid.

**DO NOT WRITE IN ANY BARCODES.**

Answer **all** questions.

All the Figures referred to in the questions are contained in the Insert.

At the end of the examination, fasten all your work securely together.

The number of marks is given in brackets [ ] at the end of each question or part question.

This document consists of **13** printed pages, **3** blank pages and **1** Insert.





**Question 1**

Refer to Fig. 1 (Insert), a news item about Rail of India, a tour operator in India.

**(a) (i)** Identify **two** target markets for Rail of India.

1 .....

.....

2 .....

..... [2]

**(ii)** Explain **one** reason why marketing is important to travel and tourism providers, such as Rail of India, when launching a new product.

.....

.....

.....

..... [2]

**(b)** Explain **one** advantage and **one** disadvantage of market penetration as a suitable pricing policy for the 'Gateway to India' product.

Advantage .....

.....

.....

.....

.....

.....

Disadvantage .....

.....

.....

.....

.....

..... [6]



(c) Identify and explain **two** ways in which Rail of India has developed its product for the needs of customers from Japan and Australia.

1 .....

.....

.....

.....

.....

.....

.....

2 .....

.....

.....

.....

.....

.....

.....

..... [6]

(d) Discuss the range of distribution channels that would be suitable for Rail of India to attract new customers from Japan and Australia.



A series of horizontal dotted lines providing space for the student's answer to question (d).

[9]

[Total: 25]



**TURN OVER FOR QUESTION 2**



**Question 2**

Refer to Fig. 2 (Insert), information about tourism in Bulgaria, a central European country.

- (a) Explain **two** ways in which tourism providers in Bulgaria can use the information from Fig. 2 to plan their marketing campaign for 2013.

1 .....

.....

.....

.....

.....

.....

.....

2 .....

.....

.....

.....

.....

.....

..... [4]



(b) Explain how tourism providers in Bulgaria might use the following pricing policies to increase sales of their food and travel services:

- special offers .....
- discount pricing .....
- variable pricing .....

[6]

(c) Explain how the following factors might affect the pricing policies used by travel and tourism providers:


- competition .....
- customers' expectations .....

[6]





**TURN OVER FOR QUESTION 3**



**Question 3**

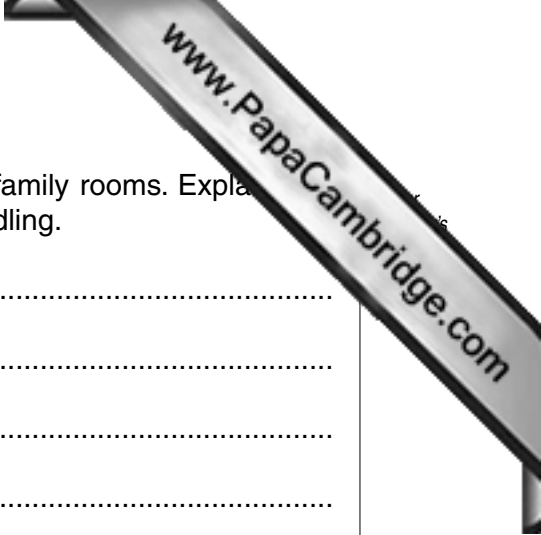
Refer to Fig. 3 (Insert), a news item about The Skanis Hotel in the North African country of Tunisia.

(a) Identify **four** ways in which The Skanis Hotel has created a family-friendly product.

- 1 .....
- 2 .....
- 3 .....
- 4 ..... [4]

(b) State and explain **two** advantages to travel and tourism organisations of providing e-ticketing.

- 1 .....
- 2 ..... [6]



(c) The Skanis Hotel has introduced price bundling for its new family rooms. Explain **one** advantage and **one** disadvantage to **customers** of price bundling.

Advantage .....

.....

.....

.....

.....

.....

.....

Disadvantage .....

.....

.....

.....

.....

.....

..... [6]





**Question 4**

Refer to Fig. 4 (Insert), a news item about Windmills of Holland, an important European visitor attraction in Holland.

(a) (i) Name **two** primary research techniques which may have been used in order to produce this news item.

1 .....

2 ..... [2]

(ii) Give **one** advantage and **one** disadvantage of using primary research data.

Advantage .....

.....

Disadvantage .....

..... [2]

(b) Windmills of Holland is at the maturity stage of the product life cycle. Explain **two** ways in which Windmills of Holland could use the characteristics of the maturity stage to plan its marketing campaign.

1 .....

.....

.....

.....

.....

.....

2 .....

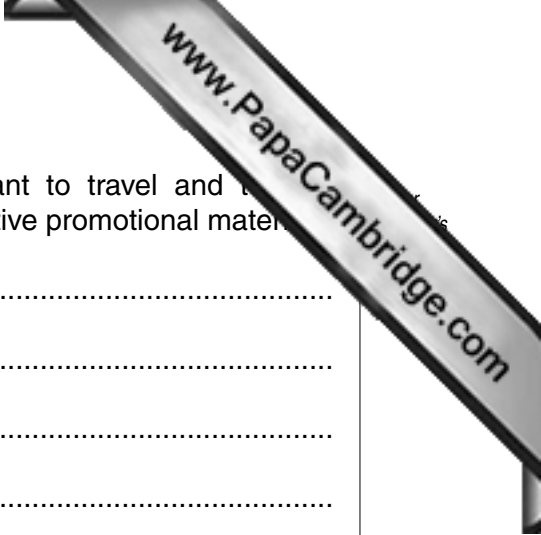
.....

.....

.....

.....

..... [6]



(c) Explain **three** reasons why brand image may be important to travel and tourism providers, such as Windmills of Holland, when planning effective promotional materials.

1 .....

.....

.....

2 .....

.....

.....

3 .....

.....

.....

..... [6]



---

Permission to reproduce items where third-party owned material protected by copyright is included has been sought and cleared where possible. Every reasonable effort has been made by the publisher (UCLES) to trace copyright holders, but if any items requiring clearance have unwittingly been included, the publisher will be pleased to make amends at the earliest possible opportunity.

University of Cambridge International Examinations is part of the Cambridge Assessment Group. Cambridge Assessment is the brand name of University of Cambridge Local Examinations Syndicate (UCLES), which is itself a department of the University of Cambridge.